

CONTENTS

INDEFINITE INTEGRATION

THEORY & ILLUSTRATIONS	Page – 01
EXERCISE(O-1)	Page – 20
EXERCISE(O-2)	Page – 22
EXERCISE(S-1)	Page – 25
EXERCISE(S-2)	Page – 26
EXERCISE(JM)	Page – 27
EXERCISE (JA)	Page – 28
ANSWER KEY	Page – 30

DEFINITE INTEGRATION

THEORY & ILLUSTRATIONS	Page – 32
EXERCISE(O-1)	Page – 49
EXERCISE(O-2)	Page – 52
EXERCISE(S-1)	Page – 56
EXERCISE(S-2)	Page – 59
EXERCISE(JM)	Page – 62
EXERCISE (JA)	Page – 64
ANSWER KEY	Page – 69

JEE (Main) Syllabus :

Integral as an anti derivative. Fundamental integrals involving algebraic, trigonometric, exponential and logarithmic functions. Integration by substitution, by parts and by partial fractions. Integration using trigonometric identities. Evaluation of simple integrals of the type $\int \frac{1}{x^2 + a^2} dx$ as limit of a sum. Fundamental Theorem of Calculus. Properties of definite integrals. Evaluation of definite integrals.

JEE (Advanced) Syllabus :

Integration as the inverse process of differentiation, indefinite integrals of standard functions, definite integrals and their properties, Fundamental Theorem of Integral Calculus. Integration by parts, integration by the methods of substitution and partial fractions.

INDEFINITE INTEGRATION

If f & F are function of x such that $F'(x) = f(x)$ then the function F is called a **PRIMITIVE OR ANTIDERIVATIVE OR INTEGRAL** of $f(x)$ w.r.t. x and is written symbolically as

$$\int f(x) dx = F(x) + C \Leftrightarrow \frac{d}{dx} \{F(x) + C\} = f(x), \text{ where } C \text{ is called the constant of integration.}$$

1. GEOMETRICAL INTERPRETATION OF INDEFINITE INTEGRAL :

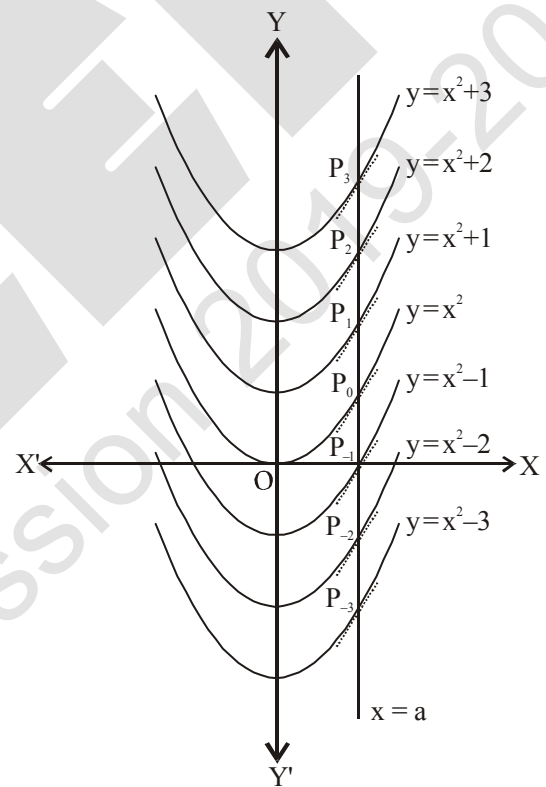
$\int f(x) dx = F(x) + C = y(\text{say})$, represents a family of curves. The different values of c will correspond to different members of this family and these members can be obtained by shifting any one of the curves parallel to itself. This is the geometrical interpretation of indefinite integral.

Let $f(x) = 2x$. Then $\int f(x) dx = x^2 + C$. For different values of C , we get different integrals. But these integrals are very similar geometrically.

Thus, $y = x^2 + C$, where C is arbitrary constant, represents a family of integrals. By assigning different values to C , we get different members of the family. These together constitute the indefinite integral. In this case, each integral represents a parabola with its axis along y -axis.

If the line $x = a$ intersects the parabolas $y = x^2$, $y = x^2 + 1$, $y = x^2 + 2$, $y = x^2 - 1$, $y = x^2 - 2$ at $P_0, P_1, P_2, P_{-1}, P_{-2}$ etc., respectively, then $\frac{dy}{dx}$ at these points equals $2a$. This indicates that the tangents to the curves at these points are parallel. Thus,

$\int 2x dx = x^2 + C = f(x) + C$ (say), implies that the tangents to all the curves $f(x) + C, C \in \mathbf{R}$, at the points of intersection of the curves by the line $x = a, (a \in \mathbf{R})$, are parallel.



2. STANDARD FORMULAE :

(i) $\int (ax + b)^n dx = \frac{(ax + b)^{n+1}}{a(n+1)} + C; n \neq -1$

(ii) $\int \frac{dx}{ax + b} = \frac{1}{a} \ell n | ax + b | + C$

(iii) $\int e^{ax+b} dx = \frac{1}{a} e^{ax+b} + C$

(iv) $\int a^{px+q} dx = \frac{1}{p} \frac{a^{px+q}}{\ln a} + C, (a > 0)$

(v) $\int \sin(ax + b) dx = -\frac{1}{a} \cos(ax + b) + C$

(vi) $\int \cos(ax + b) dx = \frac{1}{a} \sin(ax + b) + C$

(vii) $\int \tan(ax + b)dx = \frac{1}{a} \ell n |\sec(ax + b)| + C$ (viii) $\int \cot(ax + b)dx = \frac{1}{a} \ell n |\sin(ax + b)| + C$

(ix) $\int \sec^2(ax + b)dx = \frac{1}{a} \tan(ax + b) + C$

(x) $\int \operatorname{cosec}^2(ax + b)dx = -\frac{1}{a} \cot(ax + b) + C$

(xi) $\int \operatorname{cosec}(ax + b) \cdot \cot(ax + b)dx = -\frac{1}{a} \operatorname{cosec}(ax + b) + C$

(xii) $\int \sec(ax + b) \cdot \tan(ax + b)dx = \frac{1}{a} \sec(ax + b) + C$

(xiii) $\int \sec x dx = \ell n |\sec x + \tan x| + C = \ell n \left| \tan \left(\frac{\pi}{4} + \frac{x}{2} \right) \right| + C$

(xiv) $\int \operatorname{cosec} x dx = \ell n |\operatorname{cosec} x - \cot x| + C = \ell n \left| \tan \frac{x}{2} \right| + C = -\ell n |\operatorname{cosec} x + \cot x| + C$

(xv) $\int \frac{dx}{\sqrt{a^2 - x^2}} = \sin^{-1} \frac{x}{a} + C$ (xvi) $\int \frac{dx}{a^2 + x^2} = \frac{1}{a} \tan^{-1} \frac{x}{a} + C$

(xvii) $\int \frac{dx}{x\sqrt{x^2 - a^2}} = \frac{1}{a} \sec^{-1} \frac{x}{a} + C$ (xviii) $\int \frac{dx}{\sqrt{x^2 + a^2}} = \ell n \left[x + \sqrt{x^2 + a^2} \right] + C$

(xix) $\int \frac{dx}{\sqrt{x^2 - a^2}} = \ell n \left[x + \sqrt{x^2 - a^2} \right] + C$ (xx) $\int \frac{dx}{a^2 - x^2} = \frac{1}{2a} \ell n \left| \frac{a+x}{a-x} \right| + C$

(xxi) $\int \frac{dx}{x^2 - a^2} = \frac{1}{2a} \ell n \left| \frac{x-a}{x+a} \right| + C$ (xxii) $\int \sqrt{a^2 - x^2} dx = \frac{x}{2} \sqrt{a^2 - x^2} + \frac{a^2}{2} \sin^{-1} \frac{x}{a} + C$

(xxiii) $\int \sqrt{x^2 + a^2} dx = \frac{x}{2} \sqrt{x^2 + a^2} + \frac{a^2}{2} \ell n \left(x + \sqrt{x^2 + a^2} \right) + C$

(xxiv) $\int \sqrt{x^2 - a^2} dx = \frac{x}{2} \sqrt{x^2 - a^2} - \frac{a^2}{2} \ell n \left(x + \sqrt{x^2 - a^2} \right) + C$

(xxv) $\int e^{ax} \cdot \sin bx dx = \frac{e^{ax}}{a^2 + b^2} (a \sin bx - b \cos bx) + C = \frac{e^{ax}}{\sqrt{a^2 + b^2}} \sin \left(bx - \tan^{-1} \frac{b}{a} \right) + C$

(xxvi) $\int e^{ax} \cdot \cos bx dx = \frac{e^{ax}}{a^2 + b^2} (a \cos bx + b \sin bx) + C = \frac{e^{ax}}{\sqrt{a^2 + b^2}} \cos \left(bx - \tan^{-1} \frac{b}{a} \right) + C$

3. TECHNIQUES OF INTEGRATION :

(a) Substitution or change of independent variable :

If $\phi(x)$ is a continuous differentiable function, then to evaluate integrals of the form $\int f(\phi(x))\phi'(x)dx$, we substitute $\phi(x) = t$ and $\phi'(x)dx = dt$.

Hence $I = \int f(\phi(x))\phi'(x)dx$ reduces to $\int f(t)dt$.

(i) Fundamental deductions of method of substitution :

$\int [f(x)]^n f'(x)dx$ OR $\int \frac{f'(x)}{[f(x)]^n} dx$ put $f(x) = t$ & proceed.

Illustration 1 : Evaluate $\int \frac{\cos^3 x}{\sin^2 x + \sin x} dx$

Solution : $I = \int \frac{(1 - \sin^2 x) \cos x}{\sin x(1 + \sin x)} dx = \int \frac{1 - \sin x}{\sin x} \cos x dx$

Put $\sin x = t \Rightarrow \cos x dx = dt$

$$\Rightarrow I = \int \frac{1-t}{t} dt = \ell n |t| - t + C = \ell n |\sin x| - \sin x + C$$

Ans.

Illustration 2 : Evaluate $\int \frac{(x^2 - 1) dx}{(x^4 + 3x^2 + 1) \tan^{-1} \left(x + \frac{1}{x} \right)}$

Solution : The given integral can be written as

$$I = \int \frac{\left(1 - \frac{1}{x^2}\right) dx}{\left[\left(x + \frac{1}{x}\right)^2 + 1\right] \tan^{-1} \left(x + \frac{1}{x}\right)}$$

Let $\left(x + \frac{1}{x}\right) = t$. Differentiating we get $\left(1 - \frac{1}{x^2}\right) dx = dt$

$$\text{Hence } I = \int \frac{dt}{(t^2 + 1) \tan^{-1} t}$$

Now make one more substitution $\tan^{-1} t = u$. Then $\frac{dt}{t^2 + 1} = du$ and $I = \int \frac{du}{u} = \ell n |u| + C$

Returning to t , and then to x , we have

$$I = \ell n |\tan^{-1} t| + C = \ell n \left| \tan^{-1} \left(x + \frac{1}{x} \right) \right| + C$$

Ans.

Do yourself -1 :

(i) Evaluate : $\int \frac{x^2}{9 + 16x^6} dx$

(ii) Evaluate : $\int \cos^3 x dx$

(ii) Standard substitutions :

$$\int \frac{dx}{\sqrt{a^2 + x^2}} \text{ or } \int \sqrt{a^2 + x^2} dx ; \text{ put } x = a \tan \theta \text{ or } x = a \cot \theta$$

$$\int \frac{dx}{\sqrt{a^2 - x^2}} \text{ or } \int \sqrt{a^2 - x^2} dx ; \text{ put } x = a \sin \theta \text{ or } x = a \cos \theta$$

$$\int \frac{dx}{\sqrt{x^2 - a^2}} \text{ or } \int \sqrt{x^2 - a^2} dx ; \text{ put } x = a \sec \theta \text{ or } x = a \operatorname{cosec} \theta$$

$$\int \sqrt{\frac{a-x}{a+x}} dx ; \text{ put } x = a \cos 2\theta$$

$$\int \sqrt{\frac{x-\alpha}{\beta-x}} dx \text{ or } \int \sqrt{(x-\alpha)(\beta-x)} ; \text{ put } x = \alpha \cos^2 \theta + \beta \sin^2 \theta$$

$$\int \sqrt{\frac{x-\alpha}{x-\beta}} dx \text{ or } \int \sqrt{(x-\alpha)(x-\beta)} ; \text{ put } x = \alpha \sec^2 \theta - \beta \tan^2 \theta$$

$$\int \frac{dx}{\sqrt{(x-\alpha)(x-\beta)}} ; \text{ put } x - \alpha = t^2 \text{ or } x - \beta = t^2.$$

Illustration 3 : Evaluate $\int \frac{dx}{\sqrt{(x-a)(b-x)}}$

Solution : Put $x = a \cos^2 \theta + b \sin^2 \theta$, the given integral becomes

$$\begin{aligned} I &= \int \frac{2(b-a) \sin \theta \cos \theta d\theta}{\{(a \cos^2 \theta + b \sin^2 \theta - a)(b - a \cos^2 \theta - b \sin^2 \theta)\}^{\frac{1}{2}}} \\ &= \int \frac{2(b-a) \sin \theta \cos \theta d\theta}{(b-a) \sin \theta \cos \theta} = \left(\frac{b-a}{b-a}\right) \int 2d\theta = 2\theta + C = 2 \sin^{-1} \sqrt{\frac{x-a}{b-a}} + C \end{aligned}$$

Ans.

Illustration 4 : Evaluate $\int \sqrt{\frac{1-\sqrt{x}}{1+\sqrt{x}}} \cdot \frac{1}{x} dx$

Solution : Put $x = \cos^2 \theta \Rightarrow dx = -2 \sin \theta \cos \theta d\theta$

$$\begin{aligned} \Rightarrow I &= \int \sqrt{\frac{1-\cos \theta}{1+\cos \theta}} \cdot \frac{1}{\cos^2 \theta} (-2 \sin \theta \cos \theta) d\theta = -\int 2 \tan \frac{\theta}{2} \tan \theta d\theta \\ &= -4 \int \frac{\sin^2(\theta/2)}{\cos \theta} d\theta = -2 \int \frac{1-\cos \theta}{\cos \theta} d\theta = -2 \ln |\sec \theta + \tan \theta| + 2\theta + C \\ &= -2 \ln \left| \frac{1+\sqrt{1-x}}{\sqrt{x}} \right| + 2 \cos^{-1} \sqrt{x} + C \end{aligned}$$

Do yourself -2 :

(i) Evaluate : $\int \sqrt{\frac{x-3}{2-x}} dx$ (ii) Evaluate : $\int \frac{dx}{x\sqrt{x^2+4}}$

(b) Integration by part : $\int u \cdot v dx = u \int v dx - \int \left[\frac{du}{dx} \cdot \int v dx \right] dx$ where u & v are differentiable functions and are commonly designated as first & second function respectively.

Note : While using integration by parts, choose u & v such that

(i) $\int v dx$ & (ii) $\int \left[\frac{du}{dx} \cdot \int v dx \right] dx$ are simple to integrate.

This is generally obtained by choosing first function as the function which comes first in the word **ILATE**, where; I-Inverse function, L-Logarithmic function, A-Algebraic function, T-Trigonometric function & E-Exponential function.

Illustration 5 : Evaluate : $\int \cos \sqrt{x} dx$

Solution : Consider $I = \int \cos \sqrt{x} dx$

Let $\sqrt{x} = t$ then $\frac{1}{2\sqrt{x}} dx = dt$

i.e. $dx = 2\sqrt{x} dt$ or $dx = 2t dt$

so $I = \int \cos t \cdot 2t dt$

Taking t as first function, integrate it by part

$$\Rightarrow I = 2 \left[t \int \cos t dt - \int \left\{ \frac{dt}{dt} \int \cos t dt \right\} dt \right]$$

$$I = 2 \left[t \sin t - \int 1 \cdot \sin t dt \right] = 2 [t \sin t + \cos t] + C$$

$$I = 2 [\sqrt{x} \sin \sqrt{x} + \cos \sqrt{x}] + C$$

Ans.

Illustration 6 : Evaluate : $\int \frac{x}{1+\sin x} dx$

Solution : Let $I = \int \frac{x}{1+\sin x} dx = \int \frac{x(1-\sin x)}{(1+\sin x)(1-\sin x)} dx$

$$= \int \frac{x(1-\sin x)}{1-\sin^2 x} dx = \int \frac{x(1-\sin x)}{\cos^2 x} dx = \int x \sec^2 x dx - \int x \sec x \tan x dx$$

$$= \left[x \int \sec^2 x dx - \int \left\{ \frac{dx}{dx} \int \sec^2 x dx \right\} dx \right]$$

$$- \left[x \int \sec x \tan x dx - \int \left\{ \frac{dx}{dx} \int \sec x \tan x dx \right\} dx \right]$$

$$\begin{aligned}
 &= \left[x \tan x - \int \tan x dx \right] - \left[x \sec x - \int \sec x dx \right] \\
 &= \left[x \tan x - \ln |\sec x| \right] - \left[x \sec x - \ln |\sec x + \tan x| \right] + C \\
 &= x(\tan x - \sec x) + \ln \left| \frac{(\sec x + \tan x)}{\sec x} \right| + C \\
 &= \frac{-x(1 - \sin x)}{\cos x} + \ln |1 + \sin x| + C
 \end{aligned}$$

Ans.

Do yourself -3 :

(i) Evaluate : $\int xe^x dx$

(ii) Evaluate : $\int x^3 \sin(x^2) dx$

Two classic integrands :

(i) $\int e^x [f(x) + f'(x)] dx = e^x \cdot f(x) + C$

Illustration 7 : Evaluate $\int e^x \left(\frac{1-x}{1+x^2} \right)^2 dx$

Solution :

$$\begin{aligned}
 \int e^x \left(\frac{1-x}{1+x^2} \right)^2 dx &= \int e^x \frac{(1-2x+x^2)}{(1+x^2)^2} dx \\
 &= \int e^x \left(\frac{1}{(1+x^2)} - \frac{2x}{(1+x^2)^2} \right) dx = \frac{e^x}{1+x^2} + C
 \end{aligned}$$

Ans.

Illustration 8 : The value of $\int e^x \left(\frac{x^4+2}{(1+x^2)^{5/2}} \right) dx$ is equal to -

- (A) $\frac{e^x(x+1)}{(1+x^2)^{3/2}} + C$ (B) $\frac{e^x(1-x+x^2)}{(1+x^2)^{3/2}} + C$ (C) $\frac{e^x(1-x)}{(1+x^2)^{3/2}} + C$ (D) none of these

Solution :

$$\begin{aligned}
 \text{Let } I &= \int e^x \left(\frac{x^4+2}{(1+x^2)^{5/2}} \right) dx = \int e^x \left(\frac{1}{(1+x^2)^{1/2}} + \frac{1-2x^2}{(1+x^2)^{5/2}} \right) dx \\
 &= \int e^x \left(\frac{1}{(1+x^2)^{1/2}} - \frac{x}{(1+x^2)^{3/2}} + \frac{x}{(1+x^2)^{3/2}} + \frac{1-2x^2}{(1+x^2)^{5/2}} \right) dx \\
 &= \frac{e^x}{(1+x^2)^{1/2}} + \frac{xe^x}{(1+x^2)^{3/2}} + C = \frac{e^x \{1+x^2+x\}}{(1+x^2)^{3/2}} + C
 \end{aligned}$$

Ans. (D)

Do yourself - 4 :

(i) Evaluate : $\int e^x \left(\tan^{-1} x + \frac{1}{1+x^2} \right) dx$

(ii) Evaluate : $\int xe^{x^2} (\sin x^2 + \cos x^2) dx$

(ii) $\int [f(x) + xf'(x)] dx = x f(x) + C$

Illustration 9: Evaluate $\int \frac{x + \sin x}{1 + \cos x} dx$

Solution : $I = \int \frac{x + \sin x}{1 + \cos x} dx = \int \left(\frac{x + \sin x}{2 \cos^2 \frac{x}{2}} \right) dx = \int \left(x \frac{1}{2} \sec^2 \frac{x}{2} + \tan \frac{x}{2} \right) dx = x \tan \frac{x}{2} + C$ **Ans.**

Do yourself -5 :

(i) Evaluate : $\int (\tan(e^x) + xe^x \sec^2(e^x)) dx$ (ii) Evaluate : $\int (\ln x + 1) dx$

(c) Integration of trigonometric functions :

(i) $\int \sin^m x \cos^n x dx$

Case-I : When m & $n \in$ natural numbers.

- * If one of them is odd, then substitute for the term of even power.
- * If both are odd, substitute either of the term.
- * If both are even, use trigonometric identities to convert integrand into cosines of multiple angles.

Case-II : $m + n$ is a negative even integer.

- * In this case the best substitution is $\tan x = t$.

Illustration 10 : Evaluate $\int \sin^3 x \cos^5 x dx$

Solution : Put $\cos x = t$; $-\sin x dx = dt$.

so that $I = -\int (1 - t^2) \cdot t^5 dt$

$$= \int (t^7 - t^5) dt = \frac{t^8}{8} - \frac{t^6}{6} = \frac{\cos^8 x}{8} - \frac{\cos^6 x}{6} + C$$

Alternate :

Put $\sin x = t$; $\cos x dx = dt$

so that $I = \int t^3 (1 - t^2)^2 dt = \int (t^3 - 2t^5 + t^7) dt$

$$= \frac{\sin^4 x}{4} - \frac{2 \sin^6 x}{6} + \frac{\sin^8 x}{8} + C$$

Note : This problem can also be handled by successive reduction or by trigonometric identities.

Illustration 11 : Evaluate $\int \sin^2 x \cos^4 x dx$

Solution : $\int \sin^2 x \cos^4 x dx = \int \left(\frac{1 - \cos 2x}{2} \right) \left(\frac{\cos 2x + 1}{2} \right)^2 dx$

$$= \int \frac{1}{8} (1 - \cos 2x) (\cos^2 2x + 2 \cos 2x + 1) dx$$

S. No.	Form of the rational function	Form of the partial fraction
1.	$\frac{px^2 + qx + r}{(x-a)(x-b)(x-c)}$	$\frac{A}{x-a} + \frac{B}{x-b} + \frac{C}{x-c}$
2.	$\frac{px^2 + qx + r}{(x-a)^2(x-b)}$	$\frac{A}{x-a} + \frac{B}{(x-a)^2} + \frac{C}{x-b}$
3.	$\frac{px^2 + qx + r}{(x-a)(x^2 + bx + c)}$ where $x^2 + bx + c$ cannot be factorised further	$\frac{A}{x-a} + \frac{Bx + C}{x^2 + bx + c}$

Illustration 17: Evaluate : $\int \frac{x}{(x-2)(x+5)} dx$

Solution :
 $\frac{x}{(x-2)(x+5)} = \frac{A}{x-2} + \frac{B}{x+5}$
 or $x = A(x+5) + B(x-2)$.
 by comparing the coefficients, we get
 $A = 2/7$ and $B = 5/7$ so that

$$\int \frac{x}{(x-2)(x+5)} dx = \frac{2}{7} \int \frac{dx}{x-2} + \frac{5}{7} \int \frac{dx}{x+5} = \frac{2}{7} \ln |(x-2)| + \frac{5}{7} \ln |(x+5)| + C \quad \text{Ans.}$$

Illustration 18: Evaluate $\int \frac{x^4}{(x+2)(x^2+1)} dx$

Solution :
 $\frac{x^4}{(x+2)(x^2+1)} = (x-2) + \frac{3x^2+4}{(x+2)(x^2+1)}$

Now, $\frac{3x^2+4}{(x+2)(x^2+1)} = \frac{16}{5(x+2)} + \frac{-\frac{1}{5}x + \frac{2}{5}}{x^2+1}$

So, $\frac{x^4}{(x+2)(x^2+1)} = x-2 + \frac{16}{5(x+2)} + \frac{-\frac{1}{5}x + \frac{2}{5}}{x^2+1}$

Now, $\int \left((x-2) + \frac{16}{5(x+2)} + \frac{-\frac{1}{5}x + \frac{2}{5}}{x^2+1} \right) dx$

$$= \frac{x^2}{2} - 2x + \frac{2}{5} \tan^{-1} x + \frac{16}{5} \ln |x+2| - \frac{1}{10} \ln(x^2+1) + C \quad \text{Ans.}$$

Do yourself - 10 :

(i) Evaluate : $\int \frac{3x+2}{(x+1)(x+3)} dx$

(ii) Evaluate : $\int \frac{x^2-1}{(x+1)(x+2)^2} dx$

(ii) $\int \frac{dx}{ax^2 + bx + c}, \int \frac{dx}{\sqrt{ax^2 + bx + c}}, \int \sqrt{ax^2 + bx + c} dx$

Express $ax^2 + bx + c$ in the form of perfect square & then apply the standard results.

(iii) $\int \frac{px + q}{ax^2 + bx + c} dx, \int \frac{px + q}{\sqrt{ax^2 + bx + c}} dx$

Express $px + q = \ell$ (differential coefficient of denominator) + m.

Illustration 19 : Evaluate $\int \frac{dx}{2x^2 + x - 1}$

Solution :

$$\begin{aligned}
 I &= \int \frac{dx}{2x^2 + x - 1} = \frac{1}{2} \int \frac{dx}{x^2 + \frac{x}{2} - \frac{1}{2}} = \frac{1}{2} \int \frac{dx}{x^2 + \frac{x}{2} + \frac{1}{16} - \frac{1}{16} - \frac{1}{2}} \\
 &= \frac{1}{2} \int \frac{dx}{(x + 1/4)^2 - 9/16} = \frac{1}{2} \int \frac{dx}{(x + 1/4)^2 - (3/4)^2} \\
 &= \frac{1}{2} \cdot \frac{1}{2(3/4)} \log \left| \frac{x + 1/4 - 3/4}{x + 1/4 + 3/4} \right| + C \quad \left\{ \text{using, } \int \frac{dx}{x^2 - a^2} = \frac{1}{2a} \log \left| \frac{x - a}{x + a} \right| + C \right\} \\
 &= \frac{1}{3} \log \left| \frac{x - 1/2}{x + 1} \right| + C = \frac{1}{3} \log \left| \frac{2x - 1}{2(x + 1)} \right| + C
 \end{aligned}$$

Ans.

Illustration 20 : Evaluate $\int \frac{3x + 2}{4x^2 + 4x + 5} dx$

Solution :

Express $3x + 2 = \ell(\text{d.c. of } 4x^2 + 4x + 5) + m$

or, $3x + 2 = \ell(8x + 4) + m$

Comparing the coefficients, we get

$$8\ell = 3 \text{ and } 4\ell + m = 2 \Rightarrow \ell = 3/8 \text{ and } m = 2 - 4\ell = 1/2$$

$$\begin{aligned}
 \Rightarrow I &= \frac{3}{8} \int \frac{8x + 4}{4x^2 + 4x + 5} dx + \frac{1}{2} \int \frac{dx}{4x^2 + 4x + 5} \\
 &= \frac{3}{8} \log |4x^2 + 4x + 5| + \frac{1}{8} \int \frac{dx}{x^2 + x + \frac{5}{4}} \\
 &= \frac{3}{8} \log |4x^2 + 4x + 5| + \frac{1}{8} \tan^{-1} \left(x + \frac{1}{2} \right) + C
 \end{aligned}$$

Ans.

Do yourself -11 :

(i) Evaluate : $\int \frac{dx}{x^2 + x + 1}$

(ii) Evaluate : $\int \frac{5x + 4}{\sqrt{x^2 + 4x + 1}} dx$

(iv) Integrals of the form $\int \frac{x^2 + 1}{x^4 + Kx^2 + 1} dx$ OR $\int \frac{x^2 - 1}{x^4 + Kx^2 + 1} dx$, where K is any constant.

Divide N^r & D^r by x^2 & proceed.

Note : Sometimes it is useful to write the integral as a sum of two related integrals, which can be evaluated by making suitable substitutions e.g.

$$* \int \frac{2x^2}{x^4 + 1} dx = \int \frac{x^2 + 1}{x^4 + 1} dx + \int \frac{x^2 - 1}{x^4 + 1} dx \quad * \int \frac{2}{x^4 + 1} dx = \int \frac{x^2 + 1}{x^4 + 1} dx - \int \frac{x^2 - 1}{x^4 + 1} dx$$

These integrals can be called as **Algebraic Twins**.

Illustration 21 : Evaluate : $\int \frac{4}{\sin^4 x + \cos^4 x} dx$

Solution :

$$I = 4 \int \frac{1}{\sin^4 x + \cos^4 x} dx = 4 \int \frac{\sec^4 x}{1 + \tan^4 x} dx$$

$$= 4 \int \frac{(\tan^2 x + 1)\sec^2 x}{(\tan^4 x + 1)} dx$$

Now, put $\tan x = t \Rightarrow \sec^2 x dx = dt$

$$\Rightarrow I = 4 \int \frac{1 + t^2}{1 + t^4} dt = 4 \int \frac{1/t^2 + 1}{t^2 + 1/t^2} dt$$

Now, put $t - 1/t = z \Rightarrow \left(1 + \frac{1}{t^2}\right) dt = dz$

$$\Rightarrow I = 4 \int \frac{dz}{z^2 + 2} = \frac{4}{\sqrt{2}} \tan^{-1} \frac{z}{\sqrt{2}} + C = 2\sqrt{2} \tan^{-1} \frac{t - 1/t}{\sqrt{2}} + C$$

$$= 2\sqrt{2} \tan^{-1} \left(\frac{\tan x - 1/\tan x}{\sqrt{2}} \right) + C$$

Ans.

Illustration 22 : Evaluate : $\int \frac{1}{x^4 + 5x^2 + 1} dx$

Solution :

$$I = \frac{1}{2} \int \frac{2}{x^4 + 5x^2 + 1} dx$$

$$\Rightarrow I = \frac{1}{2} \int \frac{1 + x^2}{x^4 + 5x^2 + 1} dx + \frac{1}{2} \int \frac{1 - x^2}{x^4 + 5x^2 + 1} dx$$

$$= \frac{1}{2} \int \frac{1 + 1/x^2}{x^2 + 5 + 1/x^2} dx - \frac{1}{2} \int \frac{1 - 1/x^2}{x^2 + 5 + 1/x^2} dx$$

{dividing N^r and D^r by x^2 }

$$= \frac{1}{2} \int \frac{(1+1/x^2)}{(x-1/x)^2+7} dx - \frac{1}{2} \int \frac{(1-1/x^2)dx}{(x+1/x)^2+3}$$

$$= \frac{1}{2} \int \frac{dt}{t^2+(\sqrt{7})^2} - \frac{1}{2} \int \frac{du}{u^2+(\sqrt{3})^2}$$

where $t = x - \frac{1}{x}$ and $u = x + \frac{1}{x}$

$$I = \frac{1}{2} \cdot \frac{1}{\sqrt{7}} \left(\tan^{-1} \frac{t}{\sqrt{7}} \right) - \frac{1}{2} \cdot \frac{1}{\sqrt{3}} \left(\tan^{-1} \frac{u}{\sqrt{3}} \right) + C$$

$$= \frac{1}{2} \left[\frac{1}{\sqrt{7}} \tan^{-1} \left(\frac{x-1/x}{\sqrt{7}} \right) - \frac{1}{\sqrt{3}} \tan^{-1} \left(\frac{x+1/x}{\sqrt{3}} \right) \right] + C$$

Ans.

Do yourself -12 :

(i) Evaluate : $\int \frac{x^2+1}{x^4-x^2+1} dx$

(ii) Evaluate : $\int \frac{1}{1+x^4} dx$

(e) Integration of Irrational functions :

(i) $\int \frac{dx}{(ax+b)\sqrt{px+q}}$ & $\int \frac{dx}{(ax^2+bx+c)\sqrt{px+q}}$; put $px+q = t^2$

(ii) $\int \frac{dx}{(ax+b)\sqrt{px^2+qx+r}}$, put $ax+b = \frac{1}{t}$; $\int \frac{dx}{(ax^2+b)\sqrt{px^2+q}}$, put $x = \frac{1}{t}$

Illustration 23 : Evaluate $\int \frac{x+2}{(x^2+3x+3)\sqrt{x+1}} dx$

Solution : Let, $I = \int \frac{x+2}{(x^2+3x+3)\sqrt{x+1}} dx$ Put $x+1 = t^2 \Rightarrow dx = 2t dt$

$$\therefore I = \int \frac{(t^2-1)+2}{\{(t^2-1)^2+3(t^2-1)+3\}\sqrt{t^2}} \cdot (2t) dt = 2 \int \frac{t^2+1}{t^4+t^2+1} dt = 2 \int \frac{1+1/t^2}{t^2+1+1/t^2} dt$$

$$= 2 \int \frac{1+1/t^2}{(t-1/t)^2+(\sqrt{3})^2} dt = 2 \int \frac{du}{u^2+(\sqrt{3})^2} \quad \left\{ \text{where } u = t - \frac{1}{t} \right\}$$

$$= \frac{2}{\sqrt{3}} \tan^{-1} \left(\frac{u}{\sqrt{3}} \right) + C = \frac{2}{\sqrt{3}} \tan^{-1} \left(\frac{t^2-1}{\sqrt{3}t} \right) + C = \frac{2}{\sqrt{3}} \tan^{-1} \left(\frac{x}{\sqrt{3}(x+1)} \right) + C$$

Ans.

Illustration 24: Evaluate $\int \frac{dx}{(x-1)\sqrt{x^2+x+1}}$

Solution : Let, $I = \int \frac{dx}{(x-1)\sqrt{x^2+x+1}}$ put $x-1 = \frac{1}{t} \Rightarrow dx = -1/t^2 dt$

$$I = \int \frac{-1/t^2 dt}{1/t \sqrt{\left(\frac{1}{t}+1\right)^2 + \left(\frac{1}{t}+1\right)+1}} = -\int \frac{dt}{\sqrt{3t^2+3t+1}}$$

$$= -\frac{1}{\sqrt{3}} \int \frac{dt}{\sqrt{\left(t+\frac{1}{2}\right)^2 + 1/12}} = -\frac{1}{\sqrt{3}} \log \left| \left(t+\frac{1}{2}\right) + \sqrt{\left(t+\frac{1}{2}\right)^2 + 1/12} \right| + C$$

$$= -\frac{1}{\sqrt{3}} \log \left| \left(\frac{1}{x-1} + \frac{1}{2}\right) + \sqrt{\frac{12\left(\frac{1}{x-1} + \frac{1}{2}\right)^2 + 1}{12}} \right| + C$$

Ans.

Illustration 25: Evaluate : $\int \frac{dx}{(1+x^2)\sqrt{1-x^2}}$

Solution : Let, $I = \int \frac{dx}{(1+x^2)\sqrt{1-x^2}}$ Put $x = \frac{1}{t}$, So that $dx = \frac{-1}{t^2} dt$

$$\therefore I = \int \frac{-1/t^2 dt}{(1+1/t^2)\sqrt{1-1/t^2}} = -\int \frac{tdt}{(t^2+1)\sqrt{t^2-1}}$$

Again let, $t^2 = u$. So that $2t dt = du$.

$$= -\frac{1}{2} \int \frac{du}{(u+1)\sqrt{u-1}}$$
 which reduces to the form $\int \frac{dx}{P\sqrt{Q}}$ where both P and Q are linear

so that we put $u-1 = z^2$ so that $du = 2z dz$

$$\therefore I = -\frac{1}{2} \int \frac{2zdz}{(z^2+1+1)\sqrt{z^2}} = -\int \frac{dz}{(z^2+2)}$$

$$I = -\frac{1}{\sqrt{2}} \tan^{-1} \left(\frac{z}{\sqrt{2}} \right) + C$$

$$I = -\frac{1}{\sqrt{2}} \tan^{-1} \left(\frac{\sqrt{u-1}}{\sqrt{2}} \right) + C = -\frac{1}{\sqrt{2}} \tan^{-1} \left(\frac{\sqrt{t^2-1}}{\sqrt{2}} \right) + C$$

$$= -\frac{1}{\sqrt{2}} \tan^{-1} \left(\frac{\sqrt{1-x^2}}{\sqrt{2x}} \right) + C$$

Ans.

Do yourself -13 :

(i) Evaluate : $\int \frac{x}{(x-3)\sqrt{x+1}} dx$

(ii) Evaluate : $\int \frac{dx}{x^2\sqrt{1+x^2}}$

(f) Manipulating integrands :

(i) $\int \frac{dx}{x(x^n + 1)}$, $n \in \mathbb{N}$, take x^n common & put $1 + x^{-n} = t$.

(ii) $\int \frac{dx}{x^2(x^n + 1)^{\frac{(n-1)}{n}}}$, $n \in \mathbb{N}$, take x^n common & put $1 + x^{-n} = t^n$

(iii) $\int \frac{dx}{x^n(1 + x^n)^{1/n}}$, take x^n common and put $1 + x^{-n} = t^n$.

Illustration 26 : Evaluate : $\int \frac{dx}{x^n(1 + x^n)^{1/n}}$

Solution : Let $I = \int \frac{dx}{x^n(1 + x^n)^{1/n}} = \int \frac{dx}{x^{n+1} \left(1 + \frac{1}{x^n}\right)^{1/n}}$

Put $1 + \frac{1}{x^n} = t^n$, then $\frac{1}{x^{n+1}} dx = -t^{n-1} dt$

$I = -\int \frac{t^{n-1} dt}{t} = -\int t^{n-2} dt = -\frac{t^{n-1}}{n-1} + C = \frac{-1}{n-1} \left(1 + \frac{1}{x^n}\right)^{\frac{n-1}{n}} + C$

Ans.

Do yourself -14 :

(i) Evaluate : $\int \frac{dx}{x(x^2 + 1)}$

(ii) Evaluate : $\int \frac{dx}{x^2(x^3 + 1)^{2/3}}$

(iii) Evaluate : $\int \frac{dx}{x^3(x^3 + 1)^{1/3}}$

Miscellaneous Illustrations :

Illustration 27 : Evaluate $\int \frac{\cos^4 x dx}{\sin^3 x \{\sin^5 x + \cos^5 x\}^{3/5}}$

Solution : $I = \int \frac{\cos^4 x}{\sin^3 x \{\sin^5 x + \cos^5 x\}^{3/5}} dx = \int \frac{\cos^4 x}{\sin^6 x \{1 + \cot^5 x\}^{3/5}} dx = \int \frac{\cot^4 x \operatorname{cosec}^2 x dx}{(1 + \cot^5 x)^{3/5}}$

Put $1 + \cot^5 x = t$

$5 \cot^4 x \operatorname{cosec}^2 x dx = -dt$

$= -\frac{1}{5} \int \frac{dt}{t^{3/5}} = -\frac{1}{2} t^{2/5} + C = -\frac{1}{2} (1 + \cot^5 x)^{2/5} + C$

Ans.

Illustration 30 : The value of $\int \sqrt{\frac{3-x}{3+x}} \cdot \sin^{-1}\left(\frac{1}{\sqrt{6}}\sqrt{3-x}\right) dx$, is equal to -

(A) $\frac{1}{4} \left\{ -3 \left(\cos^{-1}\left(\frac{x}{3}\right) \right)^2 + 2\sqrt{9-x^2} \cdot \cos^{-1}\left(\frac{x}{3}\right) + 2x \right\} + C$

(B) $\frac{1}{4} \left\{ -3 \left(\cos^{-1}\left(\frac{x}{3}\right) \right)^2 + 2\sqrt{9-x^2} \cdot \sin^{-1}\left(\frac{x}{3}\right) + 2x \right\} + C$

(C) $\frac{1}{4} \left\{ -3 \left(\sin^{-1}\left(\frac{x}{3}\right) \right)^2 + 2\sqrt{9-x^2} \cdot \sin^{-1}\left(\frac{x}{3}\right) + 2x \right\} + C$

(D) none of these

Solution : Here, $I = \int \sqrt{\frac{3-x}{3+x}} \cdot \sin^{-1}\left(\frac{1}{\sqrt{6}}\sqrt{3-x}\right) dx$

Put $x = 3\cos 2\theta \Rightarrow dx = -6\sin 2\theta d\theta$

$$= \int \sqrt{\frac{3-3\cos 2\theta}{3+3\cos 2\theta}} \cdot \sin^{-1}\left(\frac{1}{\sqrt{6}}\sqrt{3-3\cos 2\theta}\right) (-6 \sin 2\theta) d\theta$$

$$= \int \frac{\sin \theta}{\cos \theta} \cdot \sin^{-1}(\sin \theta) \cdot (-6 \sin 2\theta) d\theta = -6 \int \theta \cdot (2 \sin^2 \theta) d\theta$$

$$= -6 \int \theta (1 - \cos 2\theta) d\theta = -6 \left\{ \frac{\theta^2}{2} - \int \theta \cos 2\theta d\theta \right\} + C$$

$$= -6 \left\{ \frac{\theta^2}{2} - \left(\theta \frac{\sin 2\theta}{2} - \int 1 \cdot \left(\frac{\sin 2\theta}{2} \right) d\theta \right) \right\} + C = -3\theta^2 + 6 \left\{ \theta \frac{\sin 2\theta}{2} + \frac{\cos 2\theta}{4} \right\} + C$$

$$= \frac{1}{4} \left\{ -3 \left(\cos^{-1}\left(\frac{x}{3}\right) \right)^2 + 2\sqrt{9-x^2} \cdot \cos^{-1}\left(\frac{x}{3}\right) + 2x \right\} + C$$

Ans. (A)

Illustration 31 : Evaluate : $\int \frac{\tan\left(\frac{\pi}{4} - x\right)}{\cos^2 x \sqrt{\tan^3 x + \tan^2 x + \tan x}} dx$

Solution : $I = \int \frac{\tan\left(\frac{\pi}{4} - x\right)}{\cos^2 x \sqrt{\tan^3 x + \tan^2 x + \tan x}} dx = \int \frac{(1 - \tan^2 x) dx}{(1 + \tan x)^2 \cos^2 x \sqrt{\tan^3 x + \tan^2 x + \tan x}}$

$$I = \int \frac{-\left(1 - \frac{1}{\tan^2 x}\right) \sec^2 x dx}{\left(\tan x + 2 + \frac{1}{\tan x}\right) \sqrt{\tan x + 1 + \frac{1}{\tan x}}}$$

$$\text{let, } y = \sqrt{\tan x + 1 + \frac{1}{\tan x}} \Rightarrow 2y \, dy = \left(\sec^2 x - \frac{1}{\tan^2 x} \cdot \sec^2 x \right) dx$$

$$\therefore I = \int \frac{-2y \, dy}{(y^2 + 1) \cdot y} = -2 \int \frac{dy}{1 + y^2}$$

$$= -2 \tan^{-1} y + c = -2 \tan^{-1} \left(\sqrt{\tan x + 1 + \frac{1}{\tan x}} \right) + C$$

Ans.

ANSWERS FOR DO YOURSELF

1: (i) $\frac{1}{36} \tan^{-1} \left(\frac{4x^3}{3} \right) + C$

(ii) $\sin x - \frac{1}{3} \sin^3 x + C$

2: (i) $\sqrt{(x-2)(3-x)} - \sin^{-1} \sqrt{3-x} + C$

(ii) $\frac{1}{2} \ln \left[\frac{\sqrt{x^2+4}-2}{x} \right] + C$

3: (i) $xe^x - e^x + C$

(ii) $\frac{1}{2} [-x^2 \cos x^2 + \sin x^2] + C$

4: (i) $e^x \tan^{-1} x + C$

(ii) $\frac{1}{2} e^{x^2} \sin(x^2) + C$

5: (i) $x \tan(e^x) + C$

(ii) $x \ln x + C$

6: (i) $\frac{1}{3} \tan^3 x + C$

(ii) $\frac{2}{3} \tan^{3/2} x + C$

(iii) $\frac{1}{3} \sin^3 x - \frac{2}{5} \sin^5 x + \frac{1}{7} \sin^7 x + C$

7: (i) $\frac{1}{\sqrt{5}} \tan^{-1} (\sqrt{5} \tan x) + C$

(ii) $\frac{2}{\sqrt{15}} \tan^{-1} \left(\frac{8 \tan x + 1}{\sqrt{15}} \right) + C$

8: (i) $\frac{1}{\sqrt{2}} \tan^{-1} \left(\frac{3 \tan x / 2 + 1}{2\sqrt{2}} \right) + C$

(ii) $\frac{1}{2\sqrt{6}} \ln \left| \frac{\sqrt{6} + \tan x / 2 - 2}{\sqrt{6} - \tan x / 2 + 2} \right| + C$

9: (i) $\frac{1}{2} x - \frac{1}{2} \ln |\sin x + \cos x| + C$

(ii) $\frac{12}{13} x - \frac{5}{13} \ln |3 \cos x + 2 \sin x| + C$

10: (i) $-\frac{1}{2} \ln |x+1| + \frac{7}{2} \ln |x+3| + C$

(ii) $\ln |x+2| + \frac{3}{x+2} + C$

11: (i) $\frac{2}{\sqrt{3}} \tan^{-1} \left(\frac{2x+1}{\sqrt{3}} \right) + C$

(ii) $5\sqrt{x^2+4x+1} - 6 \ln [(x+2) + \sqrt{x^2+4x+1}] + C$

12: (i) $\tan^{-1} \left(\frac{x^2-1}{x} \right) + C$

(ii) $\frac{1}{2\sqrt{2}} \left[\tan^{-1} \left(\frac{x^2-1}{\sqrt{2}x} \right) - \frac{1}{2} \ln \frac{x^2 - \sqrt{2}x + 1}{x^2 + \sqrt{2}x + 1} \right]$

13: (i) $2\sqrt{x+1} + \frac{3}{2} \ln \left| \frac{\sqrt{x+1}-2}{\sqrt{x+1}+2} \right| + C$

(ii) $-\frac{1}{x} \sqrt{1+x^2} + C$

14: (i) $-\frac{1}{2} \ln \left(\frac{x^2+1}{x^2} \right) + C$

(ii) $-\left(1 + \frac{1}{x^3} \right)^{1/3} + C$

(iii) $-\frac{1}{2} \left(1 + \frac{1}{x^3} \right)^{2/3} + C$

EXERCISE (O-1)

- $\int \frac{1-x^7}{x(1+x^7)} dx$ equals -

(A) $\ln x + \frac{2}{7} \ln(1+x^7) + c$ (B) $\ln x - \frac{2}{7} \ln(1-x^7) + c$
 (C) $\ln x - \frac{2}{7} \ln(1+x^7) + c$ (D) $\ln x + \frac{2}{7} \ln(1-x^7) + c$
- Primitive of $\frac{3x^4-1}{(x^4+x+1)^2}$ w.r.t. x is -

(A) $\frac{x}{x^4+x+1} + c$ (B) $-\frac{x}{x^4+x+1} + c$ (C) $\frac{x+1}{x^4+x+1} + c$ (D) $-\frac{x+1}{x^4+x+1} + c$
- If $\int \frac{\cos x - \sin x + 1 - x}{e^x + \sin x + x} dx = \ln(f(x)) + g(x) + C$ where C is the constant of integration and $f(x)$ is positive, then $f(x) + g(x)$ has the value equal to

(A) $e^x + \sin x + 2x$ (B) $e^x + \sin x$ (C) $e^x - \sin x$ (D) $e^x + \sin x + x$
- Integral of $\sqrt{1+2 \cot x(\cot x + \operatorname{cosec} x)}$ w.r.t. x is

(A) $2 \ln \cos \frac{x}{2} + c$ (B) $2 \ln \sin \frac{x}{2} + c$
 (C) $\frac{1}{2} \ln \cos \frac{x}{2} + c$ (D) $\ln \sin x - \ln(\operatorname{cosec} x - \cot x) + c$
- $\int x \cdot \frac{\ln(x+\sqrt{1+x^2})}{\sqrt{1+x^2}} dx$ equals -

(A) $\sqrt{1+x^2} \ln(x+\sqrt{1+x^2}) - x + c$ (B) $\frac{x}{2} \cdot \ln^2(x+\sqrt{1+x^2}) - \frac{x}{\sqrt{1+x^2}} + c$
 (C) $\frac{x}{2} \cdot \ln^2(x+\sqrt{1+x^2}) + \frac{x}{\sqrt{1+x^2}} + c$ (D) $\sqrt{1+x^2} \ln(x+\sqrt{1+x^2}) + x + c$
- Let $g(x)$ be an antiderivative for $f(x)$. Then $\ln(1+(g(x))^2)$ is an antiderivative for

(A) $\frac{2f(x)g(x)}{1+(f(x))^2}$ (B) $\frac{2f(x)g(x)}{1+(g(x))^2}$ (C) $\frac{2f(x)}{1+(f(x))^2}$ (D) none
- A function $y = f(x)$ satisfies $f''(x) = -\frac{1}{x^2} - \pi^2 \sin(\pi x)$; $f'(2) = \pi + \frac{1}{2}$ and $f(1) = 0$. The value of $f\left(\frac{1}{2}\right)$ is

(A) $\ln 2$ (B) 1 (C) $\frac{\pi}{2} - \ln 2$ (D) $1 - \ln 2$

15. $\int \frac{x^3}{(2x^2 + 1)^3} dx$ is equal to-

(A) $\frac{1}{4} \left(2 + \frac{1}{x^2}\right)^{-2} + C$

(B) $-\frac{1}{4} \left(2 + \frac{1}{x^2}\right)^{-2} + C$

(C) $\frac{1}{2} \left(2 + \frac{1}{x^2}\right)^{-2} + C$

(D) $\frac{1}{4} \left(2 + \frac{1}{x^2}\right)^2 + C$

(where 'C' is integration constant)

EXERCISE (O-2)

1. $\int \frac{\cot^{-1}(e^x)}{e^x} dx$ is equal to -

(A) $\frac{1}{2} \ln(e^{2x} + 1) - \frac{\cot^{-1}(e^x)}{e^x} + x + c$

(B) $\frac{1}{2} \ln(e^{2x} + 1) + \frac{\cot^{-1}(e^x)}{e^x} + x + c$

(C) $\frac{1}{2} \ln(e^{2x} + 1) - \frac{\cot^{-1}(e^x)}{e^x} - x + c$

(D) $\frac{1}{2} \ln(e^{2x} + 1) + \frac{\cot^{-1}(e^x)}{e^x} - x + c$

2. $\int (\sin(101x) \cdot \sin^{99} x) dx$ equals

(A) $\frac{\sin(100x)(\sin x)^{100}}{100} + C$

(B) $\frac{\cos(100x)(\sin x)^{100}}{100} + C$

(C) $\frac{\cos(100x)(\cos x)^{100}}{100} + C$

(D) $\frac{\sin(100x)(\sin x)^{101}}{101} + C$

3. The evaluation of $\int \frac{p x^{p+2q-1} - q x^{q-1}}{x^{2p+2q} + 2x^{p+q} + 1} dx$ is

(A) $-\frac{x^p}{x^{p+q} + 1} + C$

(B) $\frac{x^q}{x^{p+q} + 1} + C$

(C) $-\frac{x^q}{x^{p+q} + 1} + C$

(D) $\frac{x^p}{x^{p+q} + 1} + C$

4. $\int \sec^2 \theta (\sec \theta + \tan \theta)^2 d\theta$

(A) $\frac{(\sec \theta + \tan \theta)}{2} [2 + \tan \theta (\sec \theta + \tan \theta)] + C$

(B) $\frac{(\sec \theta + \tan \theta)}{3} [2 + 4 \tan \theta (\sec \theta + \tan \theta)] + C$

(C) $\frac{(\sec \theta + \tan \theta)}{3} [2 + \tan \theta (\sec \theta + \tan \theta)] + C$

(D) $\frac{3(\sec \theta + \tan \theta)}{2} [2 + \tan \theta (\sec \theta + \tan \theta)] + C$

5. The integral $\int \sqrt{\cot x} e^{\sqrt{\sin x}} \sqrt{\cos x} dx$ equals

(A) $\frac{\sqrt{\tan x} e^{\sqrt{\sin x}}}{\sqrt{\cos x}} + C$

(B) $2e^{\sqrt{\sin x}} + C$

(C) $-\frac{1}{2} e^{\sqrt{\sin x}} + C$

(D) $\frac{\sqrt{\cot x} e^{\sqrt{\sin x}}}{2\sqrt{\cos x}} + C$

Paragraph for Question Nos. 6 to 8

A curve is represented parametrically by the equations $x = e^t \cos t$ and $y = e^t \sin t$ where t is a parameter. Then

6. The relation between the parameter 't' and the angle α between the tangent to the given curve and the x-axis is given by, 't' equals

- (A) $\frac{\pi}{2} - \alpha$ (B) $\frac{\pi}{4} + \alpha$ (C) $\alpha - \frac{\pi}{4}$ (D) $\frac{\pi}{4} - \alpha$

7. The value of $\frac{d^2y}{dx^2}$ at the point where $t = 0$ is

- (A) 1 (B) 2 (C) -2 (D) 3

8. If $F(t) = \int (x + y) dt$ then the value of $F\left(\frac{\pi}{2}\right) - F(0)$ is

- (A) 1 (B) -1 (C) $e^{\pi/2}$ (D) 0

Multiple Correct :

9. Which one of the following is FALSE ?

- (A) $x \cdot \int \frac{dx}{x} = x \ln |x| + C$ (B) $x \cdot \int \frac{dx}{x} = x \ln |x| + Cx$
 (C) $\frac{1}{\cos x} \cdot \int \cos x \, dx = \tan x + C$ (D) $\frac{1}{\cos x} \cdot \int \cos x \, dx = x + C$

10. If $I_n = \int (\sin x)^n dx$ $n \in N$, then $5I_4 - 6I_6$ is equal to-

- (A) $\sin x \cdot (\cos x)^5 + C$ (B) $\cos x \cdot (\sin x)^5 + C$
 (C) $\frac{\sin 2x}{8} [\cos^2 2x + 1 - 2 \cos 2x] + C$ (D) $\frac{\sin 2x}{8} [\cos^2 2x + 1 + 2 \cos 2x] + C$

11. Let $f(x) = \sin^3 x + \sin^3\left(x + \frac{2\pi}{3}\right) + \sin^3\left(x + \frac{4\pi}{3}\right)$ then the primitive of $f(x)$ w.r.t. x is

- (A) $-\frac{3 \sin 3x}{4} + C$ (B) $\frac{1}{2} \cos^2\left(\frac{3x}{2}\right) + C$ (C) $\frac{\sin 3x}{4} + C$ (D) $\frac{\cos 3x}{4} + C$

where C is an arbitrary constant.

12. Suppose $J = \int \frac{\sin^2 x + \sin x}{1 + \sin x + \cos x} dx$ and $K = \int \frac{\cos^2 x + \cos x}{1 + \sin x + \cos x} dx$. If C is an arbitrary constant of integration then which of the following is/are correct?

- (A) $J = \frac{1}{2}(x - \sin x + \cos x) + C$ (B) $J = K - (\sin x + \cos x) + C$
 (C) $J = x - K + C$ (D) $K = \frac{1}{2}(x - \sin x + \cos x) + C$

Match the column :

13. Column-I

Column-II

(A) Let $f(x) = \int x^{\sin x} (1 + x \cos x \cdot \ln x + \sin x) dx$ and $f\left(\frac{\pi}{2}\right) = \frac{\pi^2}{4}$ (P) rational

then the value of $f(\pi)$ is

(B) Let $g(x) = \int \frac{1 + 2 \cos x}{(\cos x + 2)^2} dx$ and $g(0) = 0$ (Q) irrational

then the value of $g\left(\frac{\pi}{2}\right)$ is

(R) integral

(C) If real numbers x and y satisfy $(x + 5)^2 + (y - 12)^2 = (14)^2$ then

the minimum value of $\sqrt{(x^2 + y^2)}$ is

(S) prime

(D) Let $k(x) = \int \frac{(x^2 + 1) dx}{\sqrt[3]{x^3 + 3x + 6}}$ and $k(-1) = \frac{1}{\sqrt[3]{2}}$ then the value

of $k(-2)$ is

14. Column-I

Column-II

(A) $\int \frac{x^2(x^6 + x^5 - 1) dx}{(2x^6 + 3x^5 + 2)^2}$ (P) $\frac{1}{6} \left(\frac{1}{x^{-3}} + \frac{3}{x^{-2}} \right)^{\frac{1}{2}} + C$

(B) $\int \frac{(x^5 + x^4 + x^2) dx}{\sqrt{4x^7 + 5x^6 + 10x^4}}$ (Q) $\frac{1}{2} (1 + x^{-2} + x^{-5})^{-2} + C$

(C) $\int \frac{(2x^{12} + 5x^9) dx}{(x^5 + x^3 + 1)^3}$ (R) $-\frac{1}{6} (2x^3 + 3x^2 + 2x^{-3})^{-1} + C$

(where C is the constant of integration.)

(S) $x \left(\frac{x^3}{25} + \frac{x^2}{20} + \frac{1}{10} \right)^{\frac{1}{2}} + C$

EXERCISE (S-1)

1. $\int \frac{(\sqrt{x} + 1)(x^2 - \sqrt{x})}{x\sqrt{x} + x + \sqrt{x}} dx$
2. A function g defined for all positive real numbers, satisfies $g'(x^2) = x^3$ for all $x > 0$ and $g(1) = 1$. Compute $g(4)$.
3. $\int \left[\sin \alpha \sin(x - \alpha) + \sin^2 \left(\frac{x}{2} - \alpha \right) \right] dx$
4. $\int \frac{x^2 + 3}{x^6(x^2 + 1)} dx$
5. $\int \frac{dx}{\cot \frac{x}{2} \cdot \cot \frac{x}{3} \cdot \cot \frac{x}{6}}$
6. $\int \sqrt{\frac{\operatorname{cosec} x - \cot x}{\operatorname{cosec} x + \cot x}} \cdot \frac{\sec x}{\sqrt{1 + 2 \sec x}} dx$
7. $\int \frac{\ln \left(\ln \left(\frac{1+x}{1-x} \right) \right)}{1-x^2} dx$
8. $\int \left[\left(\frac{x}{e} \right)^x + \left(\frac{e}{x} \right)^x \right] \ell n x dx$
9. $\int \frac{x^5 + 3x^4 - x^3 + 8x^2 - x + 8}{x^2 + 1} dx$
10. $\int \frac{(\sqrt{x} + 1) dx}{\sqrt{x}(\sqrt[3]{x} + 1)}$
11. $\int \sin^{-1} \sqrt{\frac{x}{a+x}} dx$
12. $\int \frac{x \ell n x}{(x^2 - 1)^{3/2}} dx$
13. $\int \left[\frac{\sqrt{x^2 + 1} \left[\ell n(x^2 + 1) - 2 \ell n x \right]}{x^4} \right] dx$
14. $\int \frac{\tan 2\theta}{\sqrt{\cos^6 \theta + \sin^6 \theta}} d\theta$
15. $\int \frac{3x^2 + 1}{(x^2 - 1)^3} dx$
16. $\int \frac{(ax^2 - b) dx}{x\sqrt{c^2x^2 - (ax^2 + b)^2}}$
17. $\int \frac{(e^{\sqrt{x}} - e^{-\sqrt{x}}) \cos \left(e^{\sqrt{x}} + e^{-\sqrt{x}} + \frac{\pi}{4} \right) + (e^{\sqrt{x}} + e^{-\sqrt{x}}) \cos \left(e^{\sqrt{x}} - e^{-\sqrt{x}} + \frac{\pi}{4} \right)}{\sqrt{x}} dx$
18. $\int \frac{x^2 + x}{(e^x + x + 1)^2} dx$
19. $\int \frac{e^{\cos x} (x \sin^3 x + \cos x)}{\sin^2 x} dx$
20. $\int \frac{5x^4 + 4x^5}{(x^5 + x + 1)^2} dx$
21. $\int (\sin x)^{-11/3} (\cos x)^{-1/3} dx$
22. $\int \frac{dx}{\sin x + \sec x}$
23. $\int \frac{4x^5 - 7x^4 + 8x^3 - 2x^2 + 4x - 7}{x^2(x^2 + 1)^2} dx$
24. Let $\int \frac{f'(x)g(x) - g'(x)f(x)}{(f(x) + g(x))\sqrt{f(x)g(x) - g^2(x)}} dx = \sqrt{m} \tan^{-1} \left(\sqrt{\frac{f(x) - g(x)}{ng(x)}} \right) + C$,

where $m, n \in \mathbb{N}$ and 'C' is constant of integration ($g(x) > 0$). Find the value of $(m^2 + n^2)$.

25. If the value $\int \frac{1 - (\cot x)^{2008}}{\tan x + (\cot x)^{2009}} dx = \frac{1}{k} \ln |\sin^k x + \cos^k x| + C$, then find k.
26. $\int \frac{dx}{(x - \alpha)\sqrt{(x - \alpha)(x - \beta)}}$
27. Suppose $\int \frac{1 - 7 \cos^2 x}{\sin^7 x \cos^2 x} dx = \frac{g(x)}{\sin^7 x} + C$, where C is arbitrary constant of integration. Then find the value of $g'(0) + g''\left(\frac{\pi}{4}\right)$

EXERCISE (S-2)

1. $\int \frac{\tan(\ln x) \tan\left(\ln \frac{x}{2}\right) \tan(\ln 2)}{x} dx$
2. $\int \frac{e^x (2 - x^2)}{(1 - x)\sqrt{1 - x^2}} dx$
3. $\int \frac{dx}{(x + \sqrt{x(1+x)})^2}$
4. $\int \frac{dx}{\sqrt{\sin^3 x \sin(x + \alpha)}}$
5. $\int \frac{x}{(7x - 10 - x^2)^{3/2}} dx$
6. $\int \frac{(1 + x^2) dx}{1 - 2x^2 \cos \alpha + x^4} \alpha \in (0, \pi)$
7. $\int \sqrt{\frac{\sin(x - a)}{\sin(x + a)}} dx$
8. $\int \frac{\cos^2 x}{1 + \tan x} dx$
9. Let f(x) is a quadratic function such that f(0) = 1 and $\int \frac{f(x) dx}{x^2(x+1)^3}$ is a rational function, find the value of f'(0)
10. $\int \frac{\cos x - \sin x}{7 - 9 \sin 2x} dx$
11. $\int \cos 2\theta \cdot \ln \frac{\cos \theta + \sin \theta}{\cos \theta - \sin \theta} d\theta$

Match of Column :

12. $I_1 = \int \tan x \tan(ax + b) dx$ and $I_2 = \int \cot x \cot(ax + b) dx$

Column-I

- (A) value of I_1 for a = 1 is
- (B) value of I_2 for a = 1 is
- (C) value of I_1 for a = -1 is
- (D) value of I_2 for a = -1 is

Column-II

- (P) $x - \cot b \ln \frac{\cos(x - b)}{\cos x} + C$
- (Q) $\cot b \ln \frac{\sin x}{\sin(x + b)} - x + C$
- (R) $\cot b \ln \left(\frac{\cos x}{\cos(x + b)} \right) - x + C$
- (S) $x + \cot b \ln \left(\frac{\sin x}{\sin(b - x)} \right) + C$

EXERCISE (JM)

1. If the integral $\int \frac{5 \tan x}{\tan x - 2} dx = x + a \ln|\sin x - 2 \cos x| + k$ then a is equal to : [AIEEE-2012]

- (1) 2 (2) -1 (3) -2 (4) 1

2. If $\int f(x)dx = \Psi(x)$, then $\int x^5 f(x^3)dx$ is equal to : [JEE-MAIN-2013]

- (1) $\frac{1}{3} [x^3 \Psi(x^3) - \int x^2 \Psi(x^3) dx] + C$ (2) $\frac{1}{3} x^3 \Psi(x^3) - 3 \int x^3 \Psi(x^3) dx + C$
 (3) $\frac{1}{3} x^3 \Psi(x^3) - \int x^2 \Psi(x^3) dx + C$ (4) $\frac{1}{3} [x^3 \Psi(x^3) - \int x^3 \Psi(x^3) dx] + C$

3. The integral $\int \left(1 + x - \frac{1}{x}\right) e^{x + \frac{1}{x}} dx$ is equal to : [JEE-MAIN-2014]

- (1) $(x-1)e^{x + \frac{1}{x}} + c$ (2) $xe^{x + \frac{1}{x}} + c$ (3) $(x+1)e^{x + \frac{1}{x}} + c$ (4) $-xe^{x + \frac{1}{x}} + c$

4. The integral $\int \frac{dx}{x^2(x^4 + 1)^{\frac{3}{4}}}$ equals : [JEE-MAIN-2015]

- (1) $-(x^4 + 1)^{\frac{1}{4}} + c$ (2) $-\left(\frac{x^4 + 1}{x^4}\right)^{\frac{1}{4}} + c$ (3) $\left(\frac{x^4 + 1}{x^4}\right)^{\frac{1}{4}} + c$ (4) $(x^4 + 1)^{\frac{1}{4}} + c$

5. The integral $\int \frac{2x^{12} + 5x^9}{(x^5 + x^3 + 1)^3} dx$ is equal to :- [JEE-MAIN 2016]

- (1) $\frac{-x^{10}}{2(x^5 + x^3 + 1)^2} + C$ (2) $\frac{-x^5}{(x^5 + x^3 + 1)^2} + C$ (3) $\frac{x^{10}}{2(x^5 + x^3 + 1)^2} + C$ (4) $\frac{x^5}{2(x^5 + x^3 + 1)^2} + C$

where C is an arbitrary constant.

6. Let $I_n = \int \tan^n x dx, (n > 1)$. $I_4 + I_6 = a \tan^5 x + bx^5 + C$, where C is a constant of integration, then the ordered pair (a, b) is equal to :- [JEE-MAIN 2017]

- (1) $\left(-\frac{1}{5}, 0\right)$ (2) $\left(-\frac{1}{5}, 1\right)$ (3) $\left(\frac{1}{5}, 0\right)$ (4) $\left(\frac{1}{5}, -1\right)$

7. The integral $\int \frac{\sin^2 x \cos^2 x}{(\sin^5 x + \cos^3 x \sin^2 x + \sin^3 x \cos^2 x + \cos^5 x)^2} dx$ is equal to [JEE-MAIN 2018]

- (1) $\frac{-1}{3(1 + \tan^3 x)} + C$ (2) $\frac{1}{1 + \cot^3 x} + C$ (3) $\frac{-1}{1 + \cot^3 x} + C$ (4) $\frac{1}{3(1 + \tan^3 x)} + C$

(where C is a constant of integration)

8. For $x^2 \neq n\pi + 1, n \in \mathbb{N}$ (the set of natural numbers), the integral $\int x \sqrt{\frac{2\sin(x^2 - 1) - \sin 2(x^2 - 1)}{2\sin(x^2 - 1) + \sin 2(x^2 - 1)}} dx$ is

equal to :

(where c is a constant of integration)

(1) $\log_e \left| \sec \left(\frac{x^2 - 1}{2} \right) \right| + c$

(2) $\log_e \left| \frac{1}{2} \sec^2(x^2 - 1) \right| + c$

(3) $\frac{1}{2} \log_e \left| \sec^2 \left(\frac{x^2 - 1}{2} \right) \right| + c$

(4) $\frac{1}{2} \log_e |\sec(x^2 - 1)| + c$ **[JEE-MAIN 2019]**

9. If $\int \frac{\sqrt{1-x^2}}{x^4} dx = A(x)(\sqrt{1-x^2})^m + C$, for a suitable chosen integer m and a function A(x), where C

is a constant of integration then $(A(x))^m$ equals :

[JEE-MAIN 2019]

(1) $\frac{-1}{3x^3}$

(2) $\frac{-1}{27x^9}$

(3) $\frac{1}{9x^4}$

(4) $\frac{1}{27x^6}$

10. The integral $\int \cos(\log_e x) dx$ is equal to : (where C is a constant of integration) **[JEE-MAIN 2019]**

(1) $\frac{x}{2} [\sin(\log_e x) - \cos(\log_e x)] + C$

(2) $\frac{x}{2} [\cos(\log_e x) + \sin(\log_e x)] + C$

(3) $x[\cos(\log_e x) + \sin(\log_e x)] + C$

(4) $x[\cos(\log_e x) - \sin(\log_e x)] + C$

EXERCISE (JA)

1. $\int \frac{x^2 - 1}{x^3 \sqrt{2x^4 - 2x^2 + 1}} dx$ is equal to -

[JEE 2006, (3M, -1M)]

(A) $\frac{\sqrt{2x^4 - 2x^2 + 1}}{x^2} + c$

(B) $\frac{\sqrt{2x^4 - 2x^2 + 1}}{x^3} + c$

(C) $\frac{\sqrt{2x^4 - 2x^2 + 1}}{x} + c$

(D) $\frac{\sqrt{2x^4 - 2x^2 + 1}}{2x^2} + c$

2. Let $f(x) = \frac{x}{(1+x^n)^{1/n}}$ for $n \geq 2$ and $g(x) = \underbrace{(f \circ f \circ \dots \circ f)}_{f \text{ occurs } n \text{ times}}(x)$. Then $\int x^{n-2} g(x) dx$ equals.

(A) $\frac{1}{n(n-1)} (1+nx^n)^{1-\frac{1}{n}} + K$

(B) $\frac{1}{n-1} (1+nx^n)^{1-\frac{1}{n}} + K$ **[JEE 2007, 3]**

(C) $\frac{1}{n(n+1)} (1+nx^n)^{1+\frac{1}{n}} + K$

(D) $\frac{1}{n+1} (1+nx^n)^{1+\frac{1}{n}} + K$

3. Let $F(x)$ be an indefinite integral of $\sin^2 x$. [JEE 2007, 3]

Statement-1 : The function $F(x)$ satisfies $F(x + \pi) = F(x)$ for all real x .

because

Statement-2 : $\sin^2(x + \pi) = \sin^2 x$ for all real x .

(A) Statement-1 is True, Statement-2 is True ; Statement-2 is a correct explanation for Statement-1.

(B) Statement-1 is True, Statement-2 is True; Statement-2 is NOT a correct explanation for Statement-1.

(C) Statement-1 is True, Statement-2 is False.

(D) Statement-1 is False, Statement-2 is True.

4. Let $I = \int \frac{e^x}{e^{4x} + e^{2x} + 1} dx$, $J = \int \frac{e^{-x}}{e^{-4x} + e^{-2x} + 1} dx$. Then, for an arbitrary constant c , the value of $J - I$ equals [JEE 2008, 3 (-1)]

(A) $\frac{1}{2} \ln \left(\frac{e^{4x} - e^{2x} + 1}{e^{4x} + e^{2x} + 1} \right) + c$

(B) $\frac{1}{2} \ln \left(\frac{e^{2x} + e^x + 1}{e^{2x} - e^x + 1} \right) + c$

(C) $\frac{1}{2} \ln \left(\frac{e^{2x} - e^x + 1}{e^{2x} + e^x + 1} \right) + c$

(D) $\frac{1}{2} \ln \left(\frac{e^{4x} + e^{2x} + 1}{e^{4x} - e^{2x} + 1} \right) + c$

5. The integral $\int \frac{\sec^2 x}{(\sec x + \tan x)^{9/2}} dx$ equals (for some arbitrary constant K) [JEE 2012, 3M, -1M]

(A) $-\frac{1}{(\sec x + \tan x)^{11/2}} \left\{ \frac{1}{11} - \frac{1}{7} (\sec x + \tan x)^2 \right\} + K$

(B) $\frac{1}{(\sec x + \tan x)^{11/2}} \left\{ \frac{1}{11} - \frac{1}{7} (\sec x + \tan x)^2 \right\} + K$

(C) $-\frac{1}{(\sec x + \tan x)^{11/2}} \left\{ \frac{1}{11} + \frac{1}{7} (\sec x + \tan x)^2 \right\} + K$

(D) $\frac{1}{(\sec x + \tan x)^{11/2}} \left\{ \frac{1}{11} + \frac{1}{7} (\sec x + \tan x)^2 \right\} + K$

ANSWER KEY

INDEFINITE INTEGRATION

EXERCISE (O-1)

1. C 2. B 3. B 4. B 5. A 6. B 7. D 8. B
 9. A 10. B 11. A 12. B 13. B 14. C 15. A

EXERCISE (O-2)

1. C 2. A 3. C 4. C 5. B 6. C 7. B 8. C
 9. A,C,D 10. B,C 11. B,D 12. B,C 13. (A) Q ; (B) P; (C) P,R; (D) P,R,S
 14. (A) R ; (B) S; (C) Q

EXERCISE (S-1)

1. $\frac{x^2}{2} - x + C$ 2. $\frac{67}{5}$ 3. $\frac{1}{2}(x - \sin x) + C$ 4. $C - \frac{2}{x} + \frac{2}{3x^3} - \frac{3}{5x^5} - 2 \tan^{-1} x$
 5. $2 \ln \left(\sec \frac{x}{2} \right) - 3 \ln \left(\sec \frac{x}{3} \right) - 6 \ln \left(\sec \frac{x}{6} \right) + C$ 6. $\sin^{-1} \left(\frac{1}{2} \sec^2 \frac{x}{2} \right) + C$
 7. $\frac{1}{2} \left[\ln \left(\frac{1+x}{1-x} \right) \cdot \ln \left(\ln \frac{1+x}{1-x} \right) - \ln \left(\frac{1+x}{1-x} \right) \right] + C$ 8. $\left(\frac{x}{e} \right)^x - \left(\frac{e}{x} \right)^x + C$
 9. $\frac{x^4}{4} + x^3 - x^2 + 5x + \frac{1}{2} \ln(x^2 + 1) + 3 \tan^{-1} x + C$ 10. $6 \left[\frac{t^4}{4} - \frac{t^2}{2} + t + \frac{1}{2} \ln(1+t^2) - \tan^{-1} t \right] + C$ where $t = x^{1/6}$
 11. $(a+x) \arctan \sqrt{\frac{x}{a}} - \sqrt{ax} + C$ 12. $\operatorname{arcsec} x - \frac{\ln x}{\sqrt{x^2-1}} + C$ 13. $\frac{(x^2+1)\sqrt{x^2+1}}{9x^3} \left[2 - 3 \ln \left(1 + \frac{1}{x^2} \right) \right]$
 14. $\ln \left(\frac{1 + \sqrt{1 + 3 \cos^2 2\theta}}{\cos 2\theta} \right) + C$ 15. $C - \frac{x}{(x^2-1)^2}$ 16. $\sin^{-1} \left(\frac{ax^2+b}{cx} \right) + k$
 17. $2\sqrt{2} \left(\cos(e^{-\sqrt{x}}) \right) \left(\sin(e^{\sqrt{x}}) + \cos(e^{\sqrt{x}}) \right) + C$ 18. $C - \ln(1+(x+1)e^{-x}) - \frac{1}{1+(x+1)e^{-x}}$
 19. $C - e^{\cos x}(x + \operatorname{cosec} x)$ 20. $C - \frac{x+1}{x^5+x+1}$ or $C + \frac{x^5}{x^5+x+1}$ 21. $-\frac{3(1+4 \tan^2 x)}{8(\tan x)^{8/3}} + C$
 22. $\frac{1}{2\sqrt{3}} \ln \frac{\sqrt{3} + \sin x - \cos x}{\sqrt{3} - \sin x + \cos x} + \arctan(\sin x + \cos x) + C$ 23. $4 \ln x + \frac{7}{x} + 6 \tan^{-1}(x) + \frac{6x}{1+x^2} + C$
 24. 8 25. 2010 26. $\frac{-2}{\alpha-\beta} \sqrt{\frac{x-\beta}{x-\alpha}} + C$ 27. 5

EXERCISE (S-2)

1. $\ln\left(\frac{\sec(\ln x)}{\sec(\ln x/2)x^{\tan(\ln 2)}}\right) + C$ 2. $e^x \sqrt{\frac{1+x}{1-x}} + c$ 3. $2\ln\frac{t}{2t+1} + \frac{1}{2t+1} + C$, when $t = x + \sqrt{x^2 + x}$
4. $C - \frac{2}{\sin \alpha} \sqrt{\frac{\sin(x + \alpha)}{\sin x}}$ 5. $\frac{2(7x-20)}{9\sqrt{7x-10-x^2}} + C$ 6. $\frac{1}{2}\left(\operatorname{cosec}\frac{\alpha}{2}\right)\tan^{-1}\left(\left(\frac{x^2-1}{2x}\right)\operatorname{cosec}\frac{\alpha}{2}\right)$
7. $\cos a \cdot \arccos\left(\frac{\cos x}{\cos a}\right) - \sin a \cdot \ln\left(\sin x + \sqrt{\sin^2 x - \sin^2 a}\right) + C$
8. $\frac{1}{4} \ln(\cos x + \sin x) + \frac{x}{2} + \frac{1}{8}(\sin 2x + \cos 2x) + C$ 9. 3
10. $\frac{1}{24} \ln\left|\frac{(4+3\sin x+3\cos x)}{(4-3\sin x-3\cos x)}\right| + C$ 11. $\frac{1}{2}(\sin 2\theta)\ln\left(\frac{\cos\theta+\sin\theta}{\cos\theta-\sin\theta}\right) - \frac{1}{2}\ln(\sec 2\theta) + C$
12. (A) R ; (B) Q; (C) P ; (D) S

EXERCISE (JM)

1. 1 2. 3 3. 2 4. 2 5. 3 6. 3 7. 1 8. 1 or 3
9. 2 10. 2

EXERCISE (JA)

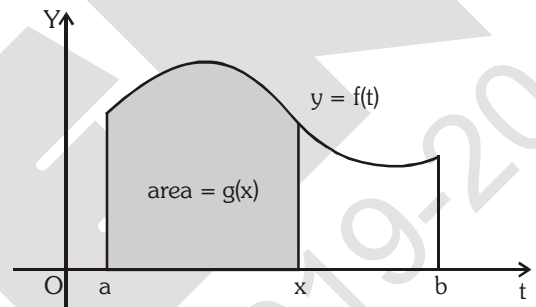
1. D 2. A 3. D 4. C 5. C

DEFINITE INTEGRATION

A definite integral is denoted by $\int_a^b f(x)dx$ which represent the algebraic area bounded by the curve $y = f(x)$, the ordinates $x = a$, $x = b$ and the x axis.

1. THE FUNDAMENTAL THEOREM OF CALCULUS :

The Fundamental Theorem of Calculus is appropriately named because it establishes a connection between the two branches of calculus : differential calculus and integral calculus. Differential calculus arose from the tangent problem, whereas integral calculus arose from a seemingly unrelated problem, the area problem. Newton's teacher at Cambridge, Isaac Barrow (1630-1677), discovered that these two problems are actually closely related. In fact, he realized that differentiation and integration are inverse processes. The Fundamental Theorem of Calculus gives the precise inverse relationship between the derivative and the integral. It was Newton and Leibnitz who exploited this relationship and used it to develop calculus into a systematic mathematical method. In particular, they saw that the Fundamental Theorem enabled them to compute areas and integrals very easily without having to compute them as limits of sums.



The Fundamental Theorem of Calculus, Part 1

If f is continuous on $[a, b]$, then the function g defined by

$$g(x) = \int_a^x f(t)dt \quad a \leq x \leq b$$

is continuous on $[a, b]$ and differentiable on (a, b) , and $g'(x) = f(x)$.

The Fundamental Theorem of Calculus, Part 2

If f is continuous on $[a, b]$, then

$$\int_a^b f(x)dx = F(b) - F(a)$$

where F is any antiderivative of f , that is, a function such that $F' = f$.

Note : If $\int_a^b f(x)dx = 0 \Rightarrow$ then the equation $f(x) = 0$ has atleast one root lying in (a, b) provided f is a continuous function in (a, b) .

2. PROPERTIES OF DEFINITE INTEGRAL :

(a) $\int_a^b f(x)dx = \int_a^b f(t)dt$ provided f is same

(b) $\int_a^b f(x)dx = -\int_b^a f(x) dx$

(c) $\int_a^b f(x)dx = \int_a^c f(x)dx + \int_c^b f(x)dx$, where c may lie inside or outside the interval $[a, b]$. This property is to be used when f is piecewise continuous in (a, b) .

Illustration 1 : If $f(x) = \begin{cases} x^2, & 0 < x < 2 \\ 3x - 4, & 2 \leq x < 3 \end{cases}$ then evaluate $\int_0^3 f(x)dx$

Solution :

$$\int_0^3 f(x)dx = \int_0^2 f(x)dx + \int_2^3 f(x)dx = \int_0^2 x^2 dx + \int_2^3 (3x - 4)dx$$

$$= \left(\frac{x^3}{3}\right)_0^2 + \left(\frac{3x^2}{2} - 4x\right)_2^3 = \frac{8}{3} + \frac{27}{2} - 12 - 6 + 8 = 37/6$$

Ans.

Illustration 2 : If $f(x) = \begin{cases} 3[x] - 5\frac{|x|}{x}, & x \neq 0 \\ 2, & x = 0 \end{cases}$ then $\int_{-3/2}^2 f(x)dx$ is equal to ($[.]$ denotes the greatest integer function)

- (A) $-\frac{11}{2}$ (B) $-\frac{7}{2}$ (C) -6 (D) $-\frac{17}{2}$

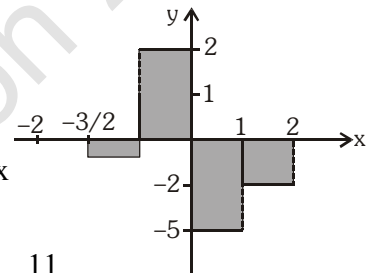
Solution :

$$3[x] - 5\frac{|x|}{x} = 3[x] - 5, \text{ if } x > 0$$

$$= 3[x] + 5, \text{ if } x < 0$$

$$\Rightarrow \int_{-3/2}^2 f(x)dx = \int_{-3/2}^{-1} (-1)dx + \int_{-1}^0 (2)dx + \int_0^1 (-5)dx + \int_1^2 (-2)dx$$

$$= -1\left(-1 + \frac{3}{2}\right) + 2(1) + 1(-5) + (-2) = -\frac{1}{2} + 2 - 5 - 2 = -\frac{11}{2}$$



Ans. (A)

Illustration 3 : The value of $\int_1^2 (x^{[x^2]} + [x^2]^x)dx$, where $[.]$ denotes the greatest integer function, is equal to -

- (A) $\frac{5}{4} + \sqrt{3} + (2^{\sqrt{3}} - 2^{\sqrt{2}}) + \frac{1}{\log 3}(9 - 3^{\sqrt{3}})$
- (B) $\frac{5}{4} + \sqrt{3} + \frac{\sqrt{2}}{3} + \frac{1}{\log 2}(2^{\sqrt{3}} - 2^{\sqrt{2}}) + \frac{1}{\log 3}(9 - 3^{\sqrt{3}})$
- (C) $\frac{5}{4} + \frac{\sqrt{2}}{3} + \frac{1}{\log 2}(2^{\sqrt{3}} - 2^{\sqrt{2}}) + \frac{1}{\log 3}(9 - 3^{\sqrt{3}})$
- (D) none of these

Solution : We have, $I = \int_1^2 (x^{\lfloor x^2 \rfloor} + \lfloor x^2 \rfloor^x) dx = \int_1^{\sqrt{2}} (x+1) dx + \int_{\sqrt{2}}^{\sqrt{3}} (x^2 + 2^x) dx + \int_{\sqrt{3}}^2 (x^3 + 3^x) dx$

$$= \left(\frac{x^2}{2} + x \right)_1^{\sqrt{2}} + \left(\frac{x^3}{3} + \frac{2^x}{\log 2} \right)_{\sqrt{2}}^{\sqrt{3}} + \left(\frac{x^4}{4} + \frac{3^x}{\log 3} \right)_{\sqrt{3}}^2$$

$$= \frac{5}{4} + \sqrt{3} + \frac{\sqrt{2}}{3} + \frac{1}{\log 2} (2^{\sqrt{3}} - 2^{\sqrt{2}}) + \frac{1}{\log 3} (3^2 - 3^{\sqrt{3}})$$

Ans. (B)

Illustration 4 : Evaluate : $\int_{-10}^{20} [\cot^{-1} x] dx$. Here $[.]$ is the greatest integer function.

Solution : $I = \int_{-10}^{20} [\cot^{-1} x] dx$, we know $\cot^{-1} x \in (0, \pi) \forall x \in \mathbb{R}$

$$\text{Thus } [\cot^{-1} x] = \begin{cases} 3, & x \in (-\infty, \cot 3) \\ 2, & x \in (\cot 3, \cot 2) \\ 1, & x \in (\cot 2, \cot 1) \\ 0 & x \in (\cot 1, \infty) \end{cases}$$

Hence $I = \int_{-10}^{\cot 3} 3 dx + \int_{\cot 3}^{\cot 2} 2 dx + \int_{\cot 2}^{\cot 1} 1 dx + \int_{\cot 1}^{20} 0 dx = 30 + \cot 1 + \cot 2 + \cot 3$

Ans.

Do yourself - 1 :

Evaluate :

(i) $\int_0^3 |x^2 - x - 2| dx$

(ii) $\int_0^4 \{x\} dx$, where $\{.\}$ denotes fractional part of x .

(iii) $\int_0^{\pi/2} |\sin x - \cos x| dx$

(iv) If $f(x) = \begin{cases} 2 & 0 \leq x \leq 1 \\ x + [x] & 1 \leq x < 3 \end{cases}$, where $[.]$ denotes the greatest integer function. Evaluate $\int_0^2 f(x) dx$

(d) $\int_{-a}^a f(x) dx = \int_0^a [f(x) + f(-x)] dx = \begin{cases} 0 & \text{; if } f(x) \text{ is an odd function} \\ 2 \int_0^a f(x) dx & \text{; if } f(x) \text{ is an even function} \end{cases}$

Illustration 5 : Evaluate $\int_{-1/2}^{1/2} \cos x \ln \left(\frac{1+x}{1-x} \right) dx$

Solution : $f(-x) = \cos(-x) \ln \left(\frac{1-x}{1+x} \right) = -\cos \ln \left(\frac{1+x}{1-x} \right) = -f(x)$

$\Rightarrow f(x)$ is odd

Hence, the value of the given integral = 0.

Ans.

Illustration 6 : If $f(x) = \begin{vmatrix} \cos x & e^{x^2} & 2x \cos^2 x / 2 \\ x^2 & \sec x & \sin x + x^3 \\ 1 & 2 & x + \tan x \end{vmatrix}$, then the value of $\int_{-\pi/2}^{\pi/2} (x^2 + 1)(f(x) + f''(x))dx$

- (A) 1 (B) -1 (C) 2 (D) none of these

Solution : As, $f(x) = \begin{vmatrix} \cos x & e^{x^2} & 2x \cos^2 x / 2 \\ x^2 & \sec x & \sin x + x^3 \\ 1 & 2 & x + \tan x \end{vmatrix}$

$\Rightarrow f(-x) = -f(x) \Rightarrow f(x)$ is odd
 $\Rightarrow f(x)$ is even $\Rightarrow f'(x)$ is odd

Thus, $f(x) + f''(x)$ is odd function let,

$\phi(x) = (x^2 + 1) \cdot \{f(x) + f''(x)\}$

$\Rightarrow \phi(-x) = -\phi(x)$

i.e. $\phi(x)$ is odd

$\therefore \int_{-\pi/2}^{\pi/2} \phi(x)dx = 0$

Ans. (D)

Do yourself -2 :

Evaluate :

(i) $\int_{-\pi/2}^{\pi/2} (x^2 \sin^3 x + \cos x)dx$

(ii) $\int_{-\pi/2}^{\pi/2} \ln \left[2 \left(\frac{4 - \sin \theta}{4 + \sin \theta} \right) \right] d\theta$

(e) $\int_a^b f(x)dx = \int_a^b f(a + b - x)dx$, In particular $\int_0^a f(x)dx = \int_0^a f(a - x)dx$

Illustration 7 : If f, g, h be continuous functions on $[0, a]$ such that $f(a - x) = -f(x)$, $g(a - x) = g(x)$ and $3h(x) - 4h(a - x) = 5$, then prove that $\int_0^a f(x)g(x)h(x)dx = 0$

Solution : $I = \int_0^a f(x)g(x)h(x)dx = \int_0^a f(a - x)g(a - x)h(a - x)dx = -\int_0^a f(x)g(x)h(a - x)dx$

$7I = 3I + 4I$

$= \int_0^a f(x)g(x)\{3h(x) - 4h(a - x)\}dx = 5 \int_0^a f(x)g(x)dx = 0$

(since $f(a - x)g(a - x) = -f(x)g(x)$)

$\Rightarrow I = 0$

Ans.

Illustration 8 : Evaluate $\int_{-\pi}^{\pi} \frac{x \sin x}{e^x + 1} dx$

Solution : $I = \int_{-\pi}^0 \frac{x \sin x}{e^x + 1} dx + \int_0^{\pi} \frac{x \sin x}{e^x + 1} dx = I_1 + I_2$

where $I_1 = \int_{-\pi}^0 \frac{x \sin x}{e^x + 1} dx$

Put $x = -t \Rightarrow dx = -dt$

$$\Rightarrow I_1 = \int_{\pi}^0 \frac{(-t) \sin(-t)(-dt)}{e^{-t} + 1} = \int_0^{\pi} \frac{t \sin t dt}{e^{-t} + 1} = \int_0^{\pi} \frac{e^t t \sin t dt}{e^t + 1} = \int_0^{\pi} \frac{e^x x \sin x dx}{e^x + 1}$$

Hence $I = I_1 + I_2 = \int_0^{\pi} \frac{e^x x \sin x}{e^x + 1} dx + \int_0^{\pi} \frac{x \sin x}{e^x + 1} dx$

$$I = \int_0^{\pi} x \sin x dx = \int_0^{\pi} (\pi - x) \sin(\pi - x) dx = \pi \int_0^{\pi} \sin x dx - I$$

$$\Rightarrow 2I = \pi \int_0^{\pi} \sin x dx = \pi [-\cos x]_0^{\pi} = 2\pi \Rightarrow I = \pi$$

Ans.

Illustration 9 : Evaluate $\int_0^2 \frac{dx}{(17 + 8x - 4x^2)[e^{6(1-x)} + 1]}$

Solution : Let $I = \int_0^2 \frac{dx}{(17 + 8x - 4x^2)[e^{6(1-x)} + 1]}$

Also $I = \int_0^2 \frac{dx}{(17 + 8x - 4x^2)[e^{-6(1-x)} + 1]} \left[\because \int_0^a f(x) dx = \int_0^a f(a-x) dx \right]$

Adding, we get

$$2I = \int_0^2 \frac{1}{17 + 8x - 4x^2} \left(\frac{1}{e^{6(1-x)} + 1} + \frac{1}{e^{-6(1-x)} + 1} \right) dx$$

$$= \int_0^2 \frac{1}{17 + 8x - 4x^2} dx = -\frac{1}{4} \int_0^2 \frac{dx}{x^2 - 2x - 17/4}$$

$$= -\frac{1}{4} \int_0^2 \frac{dx}{(x-1)^2 - 21/4} = -\frac{1}{4} \times \frac{1}{2 \times \frac{\sqrt{21}}{2}} \left[\log \left| \frac{x-1 - \frac{\sqrt{21}}{2}}{x-1 + \frac{\sqrt{21}}{2}} \right| \right]_0^2$$

$$= -\frac{1}{4\sqrt{21}} \left[\log \left| \frac{2x-2-\sqrt{21}}{2x-2+\sqrt{21}} \right| \right]_0^2 \Rightarrow I = -\frac{1}{8\sqrt{21}} \left[\log \left| \frac{2-\sqrt{21}}{2+\sqrt{21}} \right| - \log \left| \frac{2+\sqrt{21}}{\sqrt{21}-2} \right| \right]$$

$$= -\frac{1}{4\sqrt{21}} \left[\log \left| \frac{\sqrt{21}-2}{2+\sqrt{21}} \right| \right]$$

Ans.

Illustration 13: Evaluate $\int_0^{\pi} \frac{x dx}{1 + \cos^2 x}$

Solution : Let $I = \int_0^{\pi} \frac{x dx}{1 + \cos^2 x} = \int_0^{\pi} \frac{(\pi - x) dx}{1 + \cos^2(\pi - x)} = \int_0^{\pi} \frac{\pi dx}{1 + \cos^2 x} - I$

$$\Rightarrow 2I = \int_0^{\pi} \frac{\pi dx}{1 + \cos^2 x} = 2\pi \int_0^{\pi/2} \frac{dx}{1 + \cos^2 x} = 2\pi \int_0^{\pi/2} \frac{\sec^2 x dx}{2 + \tan^2 x}$$

Let $\tan x = t$ so that for $x \rightarrow 0, t \rightarrow 0$ and for $x \rightarrow \pi/2, t \rightarrow \infty$. Hence we can write,

$$I = \pi \int_0^{\infty} \frac{dt}{2 + t^2} = \pi \frac{1}{\sqrt{2}} \left[\tan^{-1} \frac{t}{\sqrt{2}} \right]_0^{\infty} = \frac{\pi^2}{2\sqrt{2}}$$

Ans.

Illustration 14: Prove that $\int_0^{\pi/2} \log(\sin x) dx = \int_0^{\pi/2} \log(\cos x) dx = -\frac{\pi}{2} \log 2$

Solution : Let $I = \int_0^{\pi/2} \log(\sin x) dx$ (i)

then $I = \int_0^{\pi/2} \log \sin \left(\frac{\pi}{2} - x \right) dx = \int_0^{\pi/2} \log(\cos x) dx$ (ii)

adding (i) and (ii), we get

$$2I = \int_0^{\pi/2} \log \sin x dx + \int_0^{\pi/2} \log \cos x dx = \int_0^{\pi/2} (\log \sin x + \log \cos x) dx$$

$$\Rightarrow 2I = \int_0^{\pi/2} \log(\sin x \cos x) dx = \int_0^{\pi/2} \log \left(\frac{2 \sin x \cos x}{2} \right) dx$$

$$= \int_0^{\pi/2} \log \left(\frac{\sin 2x}{2} \right) dx = \int_0^{\pi/2} \log(\sin 2x) dx - \int_0^{\pi/2} (\log 2) dx = \int_0^{\pi/2} \log \sin 2x \cdot dx - (\log 2)(x)_0^{\pi/2}$$

$$\Rightarrow 2I = \int_0^{\pi/2} \log(\sin 2x) dx - \frac{\pi}{2} \log 2$$
 (iii)

Let $I_1 = \int_0^{\pi/2} \log(\sin 2x) dx$, putting $2x = t$, we get

$$I_1 = \int_0^{\pi} \log(\sin t) \frac{dt}{2} = \frac{1}{2} \int_0^{\pi} \log(\sin t) dt = \frac{1}{2} \cdot 2 \int_0^{\pi/2} \log(\sin t) dt$$

$$I_1 = \int_0^{\pi/2} \log(\sin x) dx$$

\therefore (iii) becomes ; $2I = I - \frac{\pi}{2} \log 2$

Hence $\int_0^{\pi/2} \log \sin x dx = -\frac{\pi}{2} \log 2$

Ans.

Illustration 15 : $\int_0^{\pi/2} (2 \log \sin x - \log \sin 2x) dx$ equals -

- (A) $\pi \log 2$ (B) $-\pi \log 2$ (C) $(\pi/2) \log 2$ (D) $-(\pi/2) \log 2$

Solution :
$$I = \int_0^{\pi/2} (2 \log \sin x - \log 2 \sin x \cos x) dx = \int_0^{\pi/2} (2 \log \sin x - \log 2 - \log \sin x - \log \cos x) dx$$

$$= \int_0^{\pi/2} \log \sin x dx - \int_0^{\pi/2} \log 2 dx - \int_0^{\pi/2} \log \cos x dx = -(\pi/2) \log 2$$
 Ans. (D)

Do yourself -4 :

Evaluate :

(i) $\int_{-\sqrt{3}}^{\sqrt{3}} \frac{dx}{(1+e^x)(1+x^2)}$

(ii) $\int_0^{\pi/2} \ln(\sin^2 x \cos x) dx$

(iii) $\int_0^{\pi/2} \frac{\sin x - \cos x}{1 + \sin x \cos x} dx$

(iv) $\int_{-\pi/2}^{\pi/2} \sqrt{\cos x - \cos^3 x} dx$

(g) $\int_0^{nT} f(x) dx = n \int_0^T f(x) dx$, ($n \in I$); where 'T' is the period of the function i.e. $f(T+x) = f(x)$

Note that : $\int_x^{T+x} f(t) dt$ will be independent of x and equal to $\int_0^T f(t) dt$

(h) $\int_{a+nT}^{b+nT} f(x) dx = \int_a^b f(x) dx$ where f(x) is periodic with period T & $n \in I$.

(i) $\int_{mT}^{nT} f(x) dx = (n-m) \int_0^T f(x) dx$, ($n, m \in I$) if f(x) is periodic with period 'T'.

Illustration 16 : Evaluate $\int_0^{4\pi} |\cos x| dx$

Solution : Note that $|\cos x|$ is a periodic function with period π . Hence the given integral.

$$I = 4 \int_0^{\pi} |\cos x| dx = 4 \left[\int_0^{\pi/2} \cos x dx - \int_{\pi/2}^{\pi} \cos x dx \right] = 4 \left[[\sin x]_0^{\pi/2} - [\sin x]_{\pi/2}^{\pi} \right] = 4 [1 + 1] = 8 \quad \text{Ans.}$$

Illustration 17: Evaluate $\int_0^{16\pi/3} |\sin x| dx$

Solution :
$$\int_0^{16\pi/3} |\sin x| dx = \int_0^{5\pi} |\sin x| dx + \int_{5\pi}^{5\pi+\pi/3} |\sin x| dx = 5 \int_0^{\pi} |\sin x| dx + \int_0^{\pi/3} |\sin x| dx$$

$$= 5[-\cos x]_0^{\pi} + [-\cos x]_0^{\pi/3} = 10 + \left(-\frac{1}{2} + 1\right) = \frac{21}{2}$$
 Ans.

Illustration 18: Evaluate : $\int_0^{2n\pi} [\sin x + \cos x] dx$. Here $[.]$ is the greatest integer function.

Solution : Let $I = \int_0^{2n\pi} [\sin x + \cos x] dx = n \int_0^{2\pi} [\sin x + \cos x] dx$

(\because $[\sin x + \cos x]$ is periodic function with period 2π)

$$[\sin x + \cos x] = \begin{cases} 1, & 0 \leq x \leq \frac{\pi}{2} \\ 0, & \frac{\pi}{2} \leq x \leq \frac{3\pi}{4} \\ -1, & \frac{3\pi}{4} < x \leq \pi \\ -2, & \pi < x \leq \frac{3\pi}{2} \\ -1, & \frac{3\pi}{2} < x \leq \frac{7\pi}{4} \\ 0, & \frac{7\pi}{4} < x \leq 2\pi \end{cases}$$

Hence $I = n \left[\int_0^{\pi/2} 1 dx + \int_{\pi/2}^{3\pi/4} 0 dx + \int_{3\pi/4}^{\pi} -1 dx + \int_{\pi}^{3\pi/2} -2 dx + \int_{3\pi/2}^{7\pi/4} -1 dx + \int_{7\pi/4}^{2\pi} 0 dx \right]$

$$I = n \left[\frac{\pi}{2} + 0 - \pi + \frac{3\pi}{4} - 3\pi + 2\pi - \frac{7\pi}{4} + \frac{3\pi}{2} + 0 \right] = -n\pi$$
 Ans.

Do yourself -5 :

Evaluate :

(i) $\int_{-1.5}^{10} \{2x\} dx$, where $\{.\}$ denotes fractional part of x .

(ii) $\int_{20\pi+\frac{\pi}{6}}^{20\pi+\frac{\pi}{3}} (\sin x + \cos x) dx$

3. WALLI'S FORMULA :

If $m, n \in \mathbb{N}$ & $m, n \geq 2$, then

$$(a) \int_0^{\pi/2} \sin^n x \, dx = \int_0^{\pi/2} \cos^n x \, dx = \frac{(n-1)(n-3)\dots(1 \text{ or } 2)}{n(n-2)\dots(1 \text{ or } 2)} K$$

$$\text{where } K = \begin{cases} \pi/2 & \text{if } n \text{ is even} \\ 1 & \text{if } n \text{ is odd} \end{cases}$$

$$(b) \int \sin^n x \cdot \cos^m x \, dx = \frac{[(n-1)(n-3)(n-5)\dots 1 \text{ or } 2][(m-1)(m-3)\dots 1 \text{ or } 2]}{(m+n)(m+n-2)(m+n-4)\dots 1 \text{ or } 2} K$$

$$\text{Where } K = \begin{cases} \frac{\pi}{2} & \text{if both } m \text{ and } n \text{ are even} \\ 1 & \text{otherwise} \end{cases}$$

Illustration 19: $\int_{-\pi/2}^{\pi/2} \sin^4 x \cos^6 x \, dx =$

- (A) $\frac{3\pi}{64}$ (B) $\frac{3\pi}{572}$ (C) $\frac{3\pi}{256}$ (D) $\frac{3\pi}{128}$

Solution : $I = \int_{-\pi/2}^{\pi/2} \sin^4 x \cos^6 x \, dx = 2 \int_0^{\pi/2} \sin^4 x \cos^6 x \, dx = 2 \frac{(3.1)(5.3.1)}{10.8.6.4.2} \cdot \frac{\pi}{2} = \frac{3\pi}{256}$ **Ans. (C)**

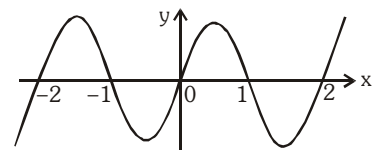
4. DERIVATIVE OF ANTIDERIVATIVE FUNCTION (Newton-Leibnitz Formula) :

If $h(x)$ & $g(x)$ are differentiable functions of x then, $\frac{d}{dx} \int_{g(x)}^{h(x)} f(t) dt = f[h(x)] \cdot h'(x) - f[g(x)] \cdot g'(x)$

Illustration 20: Find the points of maxima/minima of $\int_0^{x^2} \frac{t^2 - 5t + 4}{2 + e^t} dt$

Solution : Let $f(x) = \int_0^{x^2} \frac{t^2 - 5t + 4}{2 + e^t} dt$

$$f'(x) = \frac{x^4 - 5x^2 + 4}{2 + e^{x^2}} \cdot 2x - 0 = \frac{(x-1)(x+1)(x-2)(x+2)2x}{2 + e^{x^2}}$$



Graph of $f'(x)$

From the wavy curve, it is clear that $f'(x)$ changes its sign at $x = \pm 2, \pm 1, 0$ and hence the points of maxima are $-1, 1$ and of the minima are $-2, 0, 2$.

Illustration 21 : Evaluate $\frac{d}{dt} \int_{t^2}^{t^3} \frac{1}{\log x} dx$

Solution : $\frac{d}{dt} \int_{t^2}^{t^3} \frac{1}{\log x} dx = \frac{1}{\log t^3} \cdot \frac{d}{dt}(t^3) - \frac{1}{\log t^2} \cdot \frac{d}{dt}(t^2) = \frac{3t^2}{3 \log t} - \frac{2t}{2 \log t} = \frac{t(t-1)}{\log t}$ **Ans.**

Do yourself - 6 :

(i) If $f(x) = \int_{1/x}^{\sqrt{x}} \sin t dt$, then find $f'(1)$.

(ii) $\int_{\pi/3}^x \sqrt{3 - \sin^2 t} dt + \int_0^y \cos t dt = 0$, then evaluate $\frac{dy}{dx}$.

5. DEFINITE INTEGRAL AS LIMIT OF A SUM :

An alternative way of describing $\int_a^b f(x)dx$ is that the definite integral $\int_a^b f(x)dx$ is a limiting case of the summation of an infinite series, provided $f(x)$ is continuous on $[a,b]$

i.e. $\int_a^b f(x)dx = \lim_{n \rightarrow \infty} h \sum_{r=0}^{n-1} f(a + rh)$ where $h = \frac{b-a}{n}$. The converse is also true i.e., if we have an infinite series of the above form, it can be expressed as a definite integral.

Step I : Express the given series in the form $\sum \frac{1}{n} f\left(\frac{r}{n}\right)$

Step II : Then the limit is its sum when $n \rightarrow \infty$, i.e. $\lim_{n \rightarrow \infty} \frac{1}{n} f\left(\frac{r}{n}\right)$

Step III : Replace $\frac{r}{n}$ by x and $\frac{1}{n}$ by dx and $\lim_{n \rightarrow \infty} \sum$ by the sign of \int

Step IV : The lower and the upper limit of integration are the limiting values of $\frac{r}{n}$ for the first and the last term of r respectively.

Illustration 22 : Evaluate $\lim_{n \rightarrow \infty} \left(\frac{1}{2n+1} + \frac{1}{2n+2} + \dots + \frac{1}{6n} \right)$

Solution : Let $S_n = \frac{1}{2n+1} + \frac{1}{2n+2} + \dots + \frac{1}{6n} = \sum_{r=1}^{4n} \frac{1}{2n+r} = \sum_{r=1}^{4n} \frac{1}{n} \cdot \frac{1}{2 + \left(\frac{r}{n}\right)}$

$\Rightarrow S = \lim_{n \rightarrow \infty} S_n = \int_0^4 \frac{dx}{2+x} = [\ln |2+x|]_0^4 = \ln 6 - \ln 2 = \ln 3$

Ans.

Illustration 23 : Evaluate $\lim_{n \rightarrow \infty} \left[\frac{\sqrt{n}}{(3+4\sqrt{n})^2} + \frac{\sqrt{n}}{\sqrt{2}(3\sqrt{2}+4\sqrt{n})^2} + \frac{\sqrt{n}}{\sqrt{3}(3\sqrt{3}+4\sqrt{n})^2} + \dots + \frac{1}{49n} \right]$

Solution : Let $p = \lim_{n \rightarrow \infty} \left[\frac{\sqrt{n}}{(3+4\sqrt{n})^2} + \frac{\sqrt{n}}{\sqrt{2}(3\sqrt{2}+4\sqrt{n})^2} + \dots + \frac{\sqrt{n}}{\sqrt{n}(3\sqrt{n}+4\sqrt{n})^2} \right]$

Analyzing the expression with the view of increasing integral value we get the expression in terms of r as

$$= \lim_{n \rightarrow \infty} \sum_{r=1}^n \frac{\sqrt{n}}{\sqrt{r}(3\sqrt{r}+4\sqrt{n})^2} = \lim_{n \rightarrow \infty} \sum_{r=1}^n \frac{1}{n\sqrt{\frac{r}{n}} \left(3\sqrt{\frac{r}{n}} + 4 \right)^2} = \int_0^1 \frac{dx}{\sqrt{x}(3\sqrt{x}+4)^2}$$

Put $3\sqrt{x} + 4 = t, \therefore \frac{3}{2\sqrt{x}} dx = dt$

Hence $p = \frac{2}{3} \int_4^7 \frac{dt}{t^2} = \frac{2}{3} \left[-\frac{1}{t} \right]_4^7 = \frac{2}{3} \left(-\frac{1}{7} + \frac{1}{4} \right) = \frac{1}{14}$

Ans.

Do yourself - 7 :

Evaluate :

(i) $\lim_{n \rightarrow \infty} \left[\frac{1}{n+2.1} + \frac{1}{n+2.2} + \frac{1}{n+2.3} + \dots + \frac{1}{3n} \right]$

(ii) $\lim_{n \rightarrow \infty} \sum_{r=0}^{n-1} \frac{1}{\sqrt{n^2 - r^2}}$

6. ESTIMATION OF DEFINITE INTEGRAL :

(a) If $f(x)$ is continuous in $[a, b]$ and its range in this interval is $[m, M]$, then

$$m(b-a) \leq \int_a^b f(x) dx \leq M(b-a)$$

Illustration 24 : Prove that $4 \leq \int_1^3 \sqrt{3+x^3} dx \leq 2\sqrt{30}$

Solution : Since the function $f(x) = \sqrt{3+x^3}$ increases monotonically on the interval $[1, 3]$, $m = 2, M = \sqrt{30}, b - a = 2$.

Hence, $2.2 \leq \int_1^3 \sqrt{3+x^3} dx \leq 2\sqrt{30} \Rightarrow 4 \leq \int_1^3 \sqrt{3+x^3} dx \leq 2\sqrt{30}$

Ans.

(b) If $f(x) \leq \phi(x)$ for $a \leq x \leq b$ then $\int_a^b f(x) dx \leq \int_a^b \phi(x) dx$

Illustration 25 : Prove that $\frac{\pi}{6} \leq \int_0^1 \frac{dx}{\sqrt{4-x^2-x^3}} \leq \frac{\pi}{4\sqrt{2}}$

Solution : Since $4-x^2 \geq 4-x^2-x^3 \geq 4-2x^2 > 0 \forall x \in [0, 1]$

$$\sqrt{4-x^2} \geq \sqrt{4-x^2-x^3} \geq \sqrt{4-2x^2} > 0 \forall x \in [0, 1]$$

$$\Rightarrow 0 < \frac{1}{\sqrt{4-x^2}} \leq \frac{1}{\sqrt{4-x^2-x^3}} \leq \frac{1}{\sqrt{4-2x^2}} \forall x \in [0, 1]$$

$$\Rightarrow \int_0^1 \frac{dx}{\sqrt{4-x^2}} \leq \int_0^1 \frac{dx}{\sqrt{4-x^2-x^3}} \leq \int_0^1 \frac{dx}{\sqrt{4-2x^2}} \forall x \in [0, 1]$$

$$\Rightarrow \left[\sin^{-1} \frac{x}{2} \right]_0^1 \leq \int_0^1 \frac{dx}{\sqrt{4-x^2-x^3}} \leq \frac{1}{\sqrt{2}} \left[\sin^{-1} \frac{x}{\sqrt{2}} \right]_0^1 \Rightarrow \frac{\pi}{6} \leq \int_0^1 \frac{dx}{\sqrt{4-x^2-x^3}} \leq \frac{\pi}{4\sqrt{2}} \text{ Ans.}$$

(c) $\left| \int_a^b f(x) dx \right| \leq \int_a^b |f(x)| dx$

Illustration 26 : Prove that $\left| \int_{10}^{19} \frac{\sin x}{1+x^8} dx \right| < 10^{-7}$

Solution : To find $I = \left| \int_{10}^{19} \frac{\sin x}{1+x^8} dx \right| \leq \int_{10}^{19} \left| \frac{\sin x}{1+x^8} \right| dx$ (i)

Since $|\sin x| \leq 1$ for $x \geq 10$

The inequality $\left| \frac{\sin x}{1+x^8} \right| \leq \frac{1}{|1+x^8|}$ (ii)

also, $10 \leq x \leq 19$

$$\Rightarrow 1+x^8 > 10^8$$

$$\Rightarrow \frac{1}{1+x^8} < \frac{1}{10^8} \text{ or } \frac{1}{|1+x^8|} < 10^{-8} \text{ (iii)}$$

from (ii) and (iii) ;

$$\left| \frac{\sin x}{1+x^8} \right| < 10^{-8}$$

$$\left| \int_{10}^{19} \frac{\sin x}{1+x^8} dx \right| < \int_{10}^{19} 10^{-8} dx$$

$$\therefore \left| \int_{10}^{19} \frac{\sin x}{1+x^8} dx \right| < (19-10) \cdot 10^{-8} < 10^{-7}$$

Ans.

Illustration 27: If $f(x)$ is integrable function such that $|f(x) - f(y)| \leq |x^2 - y^2|, \forall x, y \in [a, b]$ then prove

$$\text{that } \left| \int_a^b \frac{f(x) - f(a)}{x + a} dx \right| \leq \frac{(a - b)^2}{2}.$$

Solution : Given, $\left| \int_a^b \frac{f(x) - f(a)}{x + a} dx \right| \leq \int_a^b \left| \frac{f(x) - f(a)}{x + a} \right| dx$

$$\leq \int_a^b \left| \frac{x^2 - a^2}{x + a} \right| dx = \int_a^b |x - a| dx = \int_a^b (x - a) dx = \frac{(a - b)^2}{2}$$

(d) If $f(x) \geq 0$ on the interval $[a, b]$, then $\int_a^b f(x) dx \geq 0$.

Illustration 28: If $f(x)$ is a continuous function such that $f(x) \geq 0 \forall x \in [2, 10]$ and $\int_4^8 f(x) dx = 0$, then find $f(6)$.

Solution : $f(x)$ is above the x-axis or on the x-axis for all $x \in [2, 10]$. If $f(x)$ is greater than zero for any sub interval of $[4, 8]$, then $\int_4^8 f(x) dx$ must be greater than zero.

$$\begin{aligned} \text{But } \int_4^8 f(x) dx = 0 &\Rightarrow f(x) = 0 \forall x \in [4, 8] \\ &\Rightarrow f(6) = 0. \end{aligned}$$

Do yourself - 8 :

(i) Prove that $4 \leq \int_1^3 \sqrt{3 + x^2} dx \leq 4\sqrt{3}$

(ii) Prove that $\frac{\pi}{4} \leq \int_0^{2\pi} \frac{dx}{5 + 3 \sin x} \leq \pi$.

(iii) Show that $\frac{3}{5}(2^{1/3} - 1) \leq \int_0^1 \frac{x^4}{(1 + x^6)^{2/3}} dx \leq 1$

Miscellaneous Illustrations :

Illustration 29: Evaluate : $\int_0^\pi \frac{x^3 \cos^4 x \sin^2 x}{(\pi^2 - 3\pi x + 3x^2)} dx$

Solution : Let $I = \int_0^\pi \frac{x^3 \cos^4 x \sin^2 x}{(\pi^2 - 3\pi x + 3x^2)} dx$ (i)

$$= \int_0^\pi \frac{(\pi - x)^3 \cos^4(\pi - x) \sin^2(\pi - x) dx}{\pi^2 - 3\pi(\pi - x) + 3(\pi - x)^2} \quad (\text{By Prop.})$$

$$= \int_0^{\pi} \frac{(\pi^3 - x^3 - 3\pi^2 x + 3\pi x^2) \cos^4 x \sin^2 x}{(\pi^2 - 3\pi x + 3x^2)} dx \quad \dots\dots\dots (ii)$$

Adding (i) and (ii) we have

$$2I = \int_0^{\pi} \frac{(\pi^3 - 3\pi^2 x + 3\pi x^2) \cos^4 x \sin^2 x}{(\pi^2 - 3\pi x + 3x^2)} dx$$

$$\Rightarrow 2I = \pi \int_0^{\pi} \cos^4 x \sin^2 x dx \Rightarrow 2I = 2\pi \int_0^{\pi/2} \cos^4 x \sin^2 x dx$$

$$\therefore I = \pi \int_0^{\pi/2} \cos^4 x \sin^2 x dx$$

Using walli's formula, we get $I = \pi \frac{(3.1)(1)}{6.4.2} \frac{\pi}{2} = \frac{\pi^2}{32}$ **Ans.**

Illustration 30 : Let f be an injective function such that $f(x) f(y) + 2 = f(x) + f(y) + f(xy)$ for all non negative real x and y with $f(0) = 1$ and $f(1) = 2$ find f(x) and show that $3 \int f(x) dx - x(f(x) + 2)$ is a constant.

Solution : We have $f(x)f(y) + 2 = f(x) + f(y) + f(xy)$

Putting $x = 1$ & $y = 1$

then $f(1)f(1) + 2 = 3f(1)$

we get $f(1) = 1, 2$

$f(1) \neq 1$ ($\because f(0) = 1$ & function is injective)

then $f(1) = 2$

Replacing y by $\frac{1}{x}$ in (1) then

$$f(x)f\left(\frac{1}{x}\right) + 2 = f(x) + f\left(\frac{1}{x}\right) + f(1) \Rightarrow f(x)f\left(\frac{1}{x}\right) = f(x) + f\left(\frac{1}{x}\right)$$

Hence f(x) is of the type

$$f(x) = 1 \pm x^n$$

$$\therefore f(1) = 2$$

$$\therefore f(x) = 1 + x^n$$

and $f(x) = nx^{n-1} \Rightarrow f(1) = n = 2$

$$f(x) = 1 + x^2$$

$$\therefore 3 \int f(x) dx - x(f(x) + 2) = 3 \int (1 + x^2) dx - x(1 + x^2 + 2)$$

$$= 3 \left(x + \frac{x^3}{3} \right) - x(3 + x^2) + c = c = \text{constant}$$

Solution : Given,

$$f(x) = \begin{cases} -x-1, & x < -1 \\ 1+x, & -1 \leq x < 0 \\ 1-x, & 0 \leq x \leq 1 \\ x-1, & x > 1 \end{cases} ; f(x-1) = \begin{cases} -x, & x-1 < -1 \Rightarrow x < 0 \\ x, & -1 \leq x-1 < 0 \Rightarrow 0 \leq x < 1 \\ 2-x, & 0 \leq x-1 \leq 1 \Rightarrow 1 \leq x \leq 2 \\ x-2, & x-1 > 1 \Rightarrow x > 2 \end{cases}$$

Similarly

$$f(x+1) = \begin{cases} -x-2, & x+1 < -1 \Rightarrow x < -2 \\ x+2, & -1 \leq x+1 < 0 \Rightarrow -2 \leq x < -1 \\ -x, & 0 \leq x+1 \leq 1 \Rightarrow -1 \leq x \leq 0 \\ x, & x+1 > 1 \Rightarrow x > 0 \end{cases}$$

$$\Rightarrow g(x) = f(x-1) + f(x+1) = \begin{cases} -2x-2, & x < -2 \\ 2, & -2 \leq x < -1 \\ -2x, & -1 \leq x \leq 0 \\ 2x, & 0 < x < 1 \\ 2, & 1 < x \leq 2 \\ 2x-2, & 2 < x \end{cases}$$

Clearly $g(x)$ is even,

$$\begin{aligned} \text{Now } \int_{-3}^5 g(x) dx &= 2 \int_0^3 g(x) dx + \int_3^5 g(x) dx \\ &= 2 \left(\int_0^1 2x dx + \int_1^2 2 dx + \int_2^3 (2x-2) dx \right) + \int_3^5 (2x-2) dx = 24 \end{aligned}$$

ANSWERS FOR DO YOURSELF

- | | | | |
|-----------------------------|--|-----------------------|--------------------|
| 1: (i) $\frac{31}{6}$ | (ii) 2 | (iii) $2(\sqrt{2}-1)$ | (iv) $\frac{9}{2}$ |
| 2: (i) 2 | (ii) $\pi \ln 2$ | | |
| 3: (i) 2 | (ii) $\pi/12$ | | |
| 4: (i) $\frac{\pi}{3}$ | (ii) $-\left(\frac{3\pi}{2}\right) \ln 2$ | (iii) 0 | (iv) $\frac{4}{3}$ |
| 5: (i) $\frac{23}{4}$ | (ii) $(\sqrt{3}-1)$ | | |
| 6: (i) $\frac{3}{2} \sin 1$ | (ii) $\frac{dy}{dx} = \frac{-\sqrt{3-\sin^2 x}}{\cos y}$ | | |
| 7: (i) $\frac{1}{2} \ln 3$ | (ii) $\frac{\pi}{2}$ | | |

EXERCISE (O-1)

- If $g(x) = \int_0^x \cos^4 t \, dt$, then $g(x + \pi)$ equals

(A) $g(x) + g(\pi)$ (B) $g(x) - g(\pi)$ (C) $g(x)g(\pi)$ (D) $[g(x)/g(\pi)]$
- $\int_0^1 \frac{\tan^{-1} x}{x} dx =$

(A) $\int_0^{\pi/4} \frac{\sin x}{x} dx$ (B) $\int_0^{\pi/2} \frac{x}{\sin x} dx$ (C) $\frac{1}{2} \int_0^{\pi/2} \frac{x}{\sin x} dx$ (D) $\frac{1}{2} \int_0^{\pi/4} \frac{x}{\sin x} dx$
- The value of the defined integral $\int_0^{\pi/2} (\sin x + \cos x) \cdot \sqrt{\frac{e^x}{\sin x}} dx$ equals

(A) $2\sqrt{e^{\pi/2}}$ (B) $\sqrt{e^{\pi/2}}$ (C) $2\sqrt{e^{\pi/2}} \cdot \cos 1$ (D) $\frac{1}{2} e^{\pi/4}$
- Variable x and y are related by equation $x = \int_0^y \frac{dt}{\sqrt{1+t^2}}$. The value of $\frac{d^2y}{dx^2}$ is equal to

(A) $\frac{y}{\sqrt{1+y^2}}$ (B) y (C) $\frac{2y}{\sqrt{1+y^2}}$ (D) $4y$
- If $\int_0^x f(t) dt = x + \int_x^1 t^2 \cdot f(t) dt + \frac{\pi}{4} - 1$, then the value of the integral $\int_{-1}^1 f(x) dx$ is equal to

(A) 0 (B) $\pi/4$ (C) $\pi/2$ (D) π
- If $I = \int_0^{\pi/2} \ln(\sin x) dx$ then $\int_{-\pi/4}^{\pi/4} \ln(\sin x + \cos x) dx$

(A) $\frac{I}{2}$ (B) $\frac{I}{4}$ (C) $\frac{I}{\sqrt{2}}$ (D) I
- If $f(x) = x \sin x^2$; $g(x) = x \cos x^2$ for $x \in [-1, 2]$

$A = \int_{-1}^2 f(x) dx$; $B = \int_{-1}^2 g(x) dx$, then

(A) $A > 0$; $B < 0$ (B) $A < 0$; $B > 0$ (C) $A > 0$; $B > 0$ (D) $A < 0$; $B < 0$
- The value of the definite integral $\int_0^{\pi/2} \sin x \sin 2x \sin 3x dx$ is equal to :

(A) $\frac{1}{3}$ (B) $-\frac{2}{3}$ (C) $-\frac{1}{3}$ (D) $\frac{1}{6}$
- Value of the definite integral $\int_{-1/2}^{1/2} (\sin^{-1}(3x - 4x^3) - \cos^{-1}(4x^3 - 3x)) dx$

(A) 0 (B) $-\frac{\pi}{2}$ (C) $\frac{7\pi}{2}$ (D) $\frac{\pi}{2}$

10. $\lim_{x \rightarrow \infty} \left(x^3 \int_{-1/x}^{1/x} \frac{\ln(1+t^2)}{1+e^t} dt \right)$ equals
 (A) 1/3 (B) 2/3 (C) 1 (D) 0
11. If $\frac{C_0}{1} + \frac{C_1}{2} + \frac{C_2}{3} = 0$, where C_0, C_1, C_2 are all real, the equation $C_2x^2 + C_1x + C_0 = 0$ has :
 (A) atleast one root is (0,1)
 (B) one root is (1,2) & other is (3,4)
 (C) one root is (-1,1) & the other is (-5,-2)
 (D) both roots imaginary
12. The value of the definite integral $\int_1^e ((x+1)e^x \cdot \ln x) dx$ is -
 (A) e (B) e^{e+1} (C) $e^e(e-1)$ (D) $e^e(e-1) + e$
13. $\lim_{n \rightarrow \infty} \frac{1}{\sqrt{n}\sqrt{n+1}} + \frac{1}{\sqrt{n}\sqrt{n+2}} + \dots + \frac{1}{\sqrt{n}\sqrt{4n}}$ is equal to -
 (A) 2 (B) 4 (C) $2(\sqrt{2}-1)$ (D) $2\sqrt{2}-1$
14. The value of the definite integral $\int_{19}^{37} (\{x\}^2 + 3(\sin 2\pi x)) dx$ where $\{x\}$ denotes the fractional part function.
 (A) 0 (B) 6 (C) 9 (D) can't be determined
15. $\lim_{x \rightarrow 0} \frac{\int_0^x \sin t^2 dt}{x(1-\cos x)}$ equals -
 (A) $\frac{1}{3}$ (B) 2 (C) $\frac{1}{2}$ (D) $\frac{2}{3}$
16. If $g(x)$ is the inverse of $f(x)$ and $f(x)$ has domain $x \in [1, 5]$, where $f(1) = 2$ and $f(5) = 10$ then the values of $\int_1^5 f(x) dx + \int_2^{10} g(y) dy$ equals -
 (A) 48 (B) 64 (C) 71 (D) 52
17. The value of the definite integral $\int_2^4 (x(3-x)(4+x)(6-x)(10-x) + \sin x) dx$ equals-
 (A) $\cos 2 + \cos 4$ (B) $\cos 2 - \cos 4$ (C) $\sin 2 + \sin 4$ (D) $\sin 2 - \sin 4$
18. The value of $\int_{-1}^1 \frac{dx}{\sqrt{|x|}}$ is -
 (A) $\frac{1}{2}$ (B) 2 (C) 4 (D) undefined

5. Let f be a continuous function satisfying $f'(x) = \begin{cases} 1 & \text{for } 0 < x \leq 1 \\ x & \text{for } x > 1 \end{cases}$ and $f(0) = 0$ then $f(x)$ can be defined as

(A) $f(x) = \begin{cases} 1 & \text{if } x \leq 0 \\ 1 - e^x & \text{if } x > 0 \end{cases}$

(B) $f(x) = \begin{cases} 1 & \text{if } x \leq 0 \\ e^x - 1 & \text{if } x > 0 \end{cases}$

(C) $f(x) = \begin{cases} x & \text{if } x < 0 \\ e^x & \text{if } x > 0 \end{cases}$

(D) $f(x) = \begin{cases} x & \text{if } x \leq 0 \\ e^x - 1 & \text{if } x > 0 \end{cases}$

6. Suppose f is continuous and satisfies $f(x) + f(-x) = x^2$ then the integral $\int_{-1}^1 f(x) dx$ has the value equal to

(A) $\frac{2}{3}$

(B) $\frac{1}{3}$

(C) $\frac{4}{3}$

(D) zero

7. The true set of values of 'a' for which the inequality $\int_a^0 (3^{-2x} - 2 \cdot 3^{-x}) dx \geq 0$ is true is -

(A) $[0, 1]$

(B) $(-\infty, -1]$

(C) $[0, \infty)$

(D) $(-\infty, -1] \cup [0, \infty)$

8. If the value of the integral $\int_1^2 e^{x^2} dx$ is α , then the value of $\int_e^{e^4} \sqrt{\ln x} dx$ is -

(A) $e^4 - e - \alpha$

(B) $2e^4 - e - \alpha$

(C) $2(e^4 - e) - \alpha$

(D) $2e^4 - 1 - \alpha$

9. If $\int_0^1 \frac{e^t dt}{1+t} = A$ then the value of $\int_0^1 \frac{e^t dt}{(1+t)^2}$ is -

(A) $A + \frac{e}{2} - 1$

(B) $A - \frac{e}{2} + 1$

(C) $A - \frac{e}{2} - 1$

(D) $A + \frac{e}{2} + 1$

10. Which one of the following functions is not continuous on $(0, \pi)$?

(A) $f(x) = \cot x$

(B) $g(x) = \int_0^x t \sin \frac{1}{t} dt$

(C) $h(x) = \begin{cases} 1 & 0 < x \leq \frac{3\pi}{4} \\ 2 \sin \frac{2}{9} x & \frac{3\pi}{4} < x < \pi \end{cases}$

(D) $l(x) = \begin{cases} x \sin x, & 0 < x \leq \frac{\pi}{2} \\ \frac{\pi}{2} \sin(x + \pi), & \frac{\pi}{2} < x < \pi \end{cases}$

11. $\int_0^{\pi/2} \frac{\sqrt{\sec x - \tan x}}{\sqrt{\sec x + \tan x}} \cdot \frac{\operatorname{cosec} x}{\sqrt{1 + 2 \operatorname{cosec} x}} dx$ has the value -

(A) $\pi/6$

(B) $\pi/4$

(C) $\pi/3$

(D) $2\pi/3$

12. The value of $\lim_{n \rightarrow \infty} \sum_{r=1}^{r=4n} \frac{\sqrt{n}}{\sqrt{r}(3\sqrt{r} + 4\sqrt{n})^2}$ is equal to
 (A) $\frac{1}{35}$ (B) $\frac{1}{14}$ (C) $\frac{1}{10}$ (D) $\frac{1}{5}$
13. The value of $\int_{\pi}^{2\pi} [2 \cos x] dx$ where $[.]$ represents the greatest integer function, is -
 (A) $-\frac{5\pi}{6}$ (B) $-\frac{\pi}{2}$ (C) $-\pi$ (D) none
14. $\lim_{k \rightarrow 0} \frac{1}{k} \int_0^k (1 + \sin 2x)^{\frac{1}{x}} dx$ -
 (A) 2 (B) 1 (C) e^2 (D) non existent
15. The value of the definite integral $\int_0^{\pi/3} \ln(1 + \sqrt{3} \tan x) dx$ equals-
 (A) $\frac{\pi}{3} \ln 2$ (B) $\frac{\pi}{3}$ (C) $\frac{\pi^2}{6} \ln 2$ (D) $\frac{\pi}{2} \ln 2$

Paragraph for Question Nos. 16 to 18

Let the function f satisfies

$$f(x) \cdot f'(-x) = f(-x) \cdot f'(x) \text{ for all } x \text{ and } f(0) = 3.$$

16. The value of $f(x) \cdot f(-x)$ for all x , is
 (A) 4 (B) 9 (C) 12 (D) 16
17. $\int_{-51}^{51} \frac{dx}{3 + f(x)}$ has the value equal to
 (A) 17 (B) 34 (C) 102 (D) 0
18. Number of roots of $f(x) = 0$ in $[-2, 2]$ is
 (A) 0 (B) 1 (C) 2 (D) 4

Multiple Correct :

19. $\int_0^{\infty} \frac{x}{(1+x)(1+x^2)} dx =$
 (A) $\frac{\pi}{4}$ (B) $\frac{\pi}{2}$
 (C) is same as $\int_0^{\infty} \frac{dx}{(1+x)(1+x^2)}$ (D) cannot be evaluated
20. Let $u = \int_0^{\infty} \frac{dx}{x^4 + 7x^2 + 1}$ & $v = \int_0^{\infty} \frac{x^2 dx}{x^4 + 7x^2 + 1}$ then -
 (A) $v > u$ (B) $6v = \pi$ (C) $3u + 2v = 5\pi/6$ (D) $u + v = \pi/3$

21. Which of the following pair(s) of functions are the primitive of one and the same function ?

(A) $f(x) = \ln ax; g(x) = \ln x$

(B) $f(x) = 2 \sin^2 x; g(x) = -\cos 2x$

(C) $f(x) = (e^x + e^{-x})^2; g(x) = (e^x - e^{-x})^2$

(D) $f(x) = \frac{e^x(e^x + e^{-x})}{2}; g(x) = \frac{e^x(e^x - e^{-x})}{2}$

22. Let $S_n = \sum_{k=1}^n \frac{k^2 + n^2}{n^3}$ and $T_n = \sum_{k=0}^{n-1} \frac{k^2 + n^2}{n^3}$ for $n = 1, 2, 3, \dots$. Then -

(A) $S_n < \frac{4}{3}$

(B) $T_n > \frac{4}{3}$

(C) $S_n > \frac{4}{3}$

(D) $T_n < \frac{4}{3}$

23. Which of the following statement(s) is/are TRUE ?

(A) $\int_0^1 \ln x dx = -1$

(B) $\lim_{n \rightarrow \infty} \frac{1}{n} \ln \left(\left(1 + \frac{1}{n}\right) \left(1 + \frac{2}{n}\right) \dots \left(1 + \frac{n}{n}\right) \right) = 1 + 2 \ln 2$.

(C) Let f be a continuous and non-negative function defined on $[a, b]$.

If $\int_a^b f(x) dx = 0$ then $f(x) = 0 \forall x \in [a, b]$

(D) Let f be a continuous function defined on $[a, b]$ such that $\int_a^b f(x) dx = 0$, then there exists atleast one

$c \in (a, b)$ for which $f(c) = 0$.

24. Let $f(x) = \begin{cases} x + 1, & 0 \leq x \leq 1 \\ 2x^2 - 6x + 6, & 1 < x \leq 2 \end{cases}$ and $g(t) = \int_{t-1}^t f(x) dx$ for $t \in [1, 2]$

Which of the following hold(s) good ?

(A) $f(x)$ is continuous and differentiable in $[0, 2]$

(B) $g'(t)$ vanishes for $t = 3/2$ and 2

(C) $g(t)$ is maximum at $t = 3/2$

(D) $g(t)$ is minimum at $t = 1$

EXERCISE (S-1)

1. Evaluate : (i) $\int_0^1 e^{\ln \tan^{-1} x} \cdot \sin^{-1}(\cos x) dx$ (ii) $\int_{1/3}^3 \frac{\sin^{-1} \frac{x}{\sqrt{1+x^2}}}{x} dx$
2. Evaluate : $\int_0^1 \frac{\sin^{-1} \sqrt{x}}{\sqrt{x(1-x)}} dx$
3. Evaluate : $\int_0^{\pi/2} \frac{1+2\cos x}{(2+\cos x)^2} dx$
4. Evaluate : $\int_0^{\pi/2} e^x \left\{ \cos(\sin x) \cos^2 \frac{x}{2} + \sin(\sin x) \sin^2 \frac{x}{2} \right\} dx$
5. Evaluate : $\int_1^e \left\{ (1+x)e^x + (1-x)e^{-x} \right\} \ln x dx$
6. If $P = \int_0^{\infty} \frac{x^2}{1+x^4} dx$; $Q = \int_0^{\infty} \frac{x dx}{1+x^4}$ and $R = \int_0^{\infty} \frac{dx}{1+x^4}$, then prove that :
 (a) $Q = \frac{\pi}{4}$, (b) $P = R$, (c) $P - \sqrt{2}Q + R = \frac{\pi}{2\sqrt{2}}$
7. $\int_1^2 \frac{(x^2-1)dx}{x^3 \cdot \sqrt{2x^4-2x^2+1}} = \frac{u}{v}$ where u and v are in their lowest form. Find the value of $\frac{(1000)u}{v}$.
8. Let $h(x) = (f \circ g)(x) + K$ where K is any constant. If $\frac{d}{dx}(h(x)) = -\frac{\sin x}{\cos^2(\cos x)}$ then compute the value of $j(0)$ where $j(x) = \int_{g(x)}^{f(x)} \frac{f(t)}{g(t)} dt$, where f and g are trigonometric functions.
9. Evaluate : $\int_0^{\pi/2} \sqrt{\frac{1-\sin 2x}{1+\sin 2x}} dx$
10. If a_1, a_2 and a_3 are the three values of a which satisfy the equation $\int_0^{\pi/2} (\sin x + a \cos x)^3 dx - \frac{4a}{\pi-2} \int_0^{\pi/2} x \cos x dx = 2$ then find the value of $1000(a_1^2 + a_2^2 + a_3^2)$.
11. Evaluate : $\int_{-\sqrt{2}}^{\sqrt{2}} \frac{2x^7 + 3x^6 - 10x^5 - 7x^3 - 12x^2 + x + 1}{x^2 + 2} dx$
12. Evaluate : $\int_{-2}^2 \frac{x^2 - x}{\sqrt{x^2 + 4}} dx$
13. Let $u = \int_0^{\pi/4} \left(\frac{\cos x}{\sin x + \cos x} \right)^2 dx$ and $v = \int_0^{\pi/4} \left(\frac{\sin x + \cos x}{\cos x} \right)^2 dx$. Find the value of $\frac{v}{u}$.

14. Evaluate : $\int_0^{\pi/4} \frac{x \, dx}{\cos x (\cos x + \sin x)}$
15. Evaluate : $\int_0^1 \frac{\sin^{-1} \sqrt{x}}{x^2 - x + 1} dx$
16. Evaluate : $\int_1^{1+\sqrt{5}} \frac{x^2 + 1}{x^4 - x^2 + 1} \ln \left(1 + x - \frac{1}{x} \right) dx$
17. $\lim_{n \rightarrow \infty} n^2 \int_{-1/n}^{1/n} (2010 \sin x + 2012 \cos x) |x| \, dx$
18. If $\int_0^{\pi} \sqrt{(\cos x + \cos 2x + \cos 3x)^2 + (\sin x + \sin 2x + \sin 3x)^2} \, dx$ has the value equal to $\left(\frac{\pi}{k} + \sqrt{w} \right)$ where k and w are positive integers, find the value of $(k^2 + w^2)$.
19. Evaluate : $\int_0^{\pi/2} \frac{a \sin x + b \cos x}{\sin \left(\frac{\pi}{4} + x \right)} dx$
20. A continuous real function f satisfies $f(2x) = 3 f(x) \forall x \in \mathbb{R}$
 If $\int_0^1 f(x) dx = 1$, then compute the value of definite integral $\int_1^2 f(x) dx$
21. Evaluate : $\int_0^{\pi} \frac{(ax + b) \sec x \tan x}{4 + \tan^2 x} dx (a, b > 0)$
22. Evaluate : $\int_0^{\pi} \frac{(2x + 3) \sin x}{(1 + \cos^2 x)} dx$
23. Evaluate : $\int_0^3 \sqrt{\frac{x}{3-x}} \, dx$
24. Let $I_n = \int_{-n}^n \left(\{x+1\} \cdot \{x^2+2\} + \{x^2+2\} \{x^3+4\} \right) dx$, where $\{.\}$ denotes the fractional part of x . Find I_1 .
25. Evaluate : $\int_0^a \frac{\ln(1+ax)}{1+x^2} dx, a \in \mathbb{N}$
26. Evaluate : $\int_0^{\ln 3} \frac{e^x + 1}{e^{2x} + 1} dx$

27. Let $I = \int_0^1 \frac{2 + 3x + 4x^2}{2\sqrt{1+x+x^2}} dx$. Find the value of I^2 .

28. Evaluate : $\int_{-1}^1 \frac{(2x^{332} + x^{998} + 4x^{1668} \cdot \sin x^{691})}{1+x^{666}} dx$

29. Show that $\int_0^{p+q\pi} |\cos x| dx = 2q + \sin p$ where $q \in \mathbb{N}$ & $-\frac{\pi}{2} < p < \frac{\pi}{2}$.

30. Evaluate : $\int_0^{\pi} \frac{x^2 \sin 2x \cdot \sin\left(\frac{\pi}{2} \cdot \cos x\right)}{2x - \pi} dx$

31. If $\phi(x) = \cos x - \int_0^x (x-t)\phi(t)dt$. Then find the value of $\phi''(x) + \phi(x)$.

32. (a) Let $g(x) = x^c \cdot e^{2x}$ & let $f(x) = \int_0^x e^{2t} \cdot (3t^2 + 1)^{1/2} dt$. For a certain value of 'c', the limit of $\frac{f'(x)}{g'(x)}$ as $x \rightarrow \infty$ is finite and non-zero. Determine the value of 'c' and the limit.

(b) Find the constants 'a' ($a > 0$) and 'b' such that $\lim_{x \rightarrow 0} \frac{\int_0^x \frac{t^2 dt}{\sqrt{a+t}}}{bx - \sin x} = 1$.

33. Evaluate : $\lim_{x \rightarrow +\infty} \frac{d}{dx} \int_{2\sin^{-1}\frac{1}{x}}^{3\sqrt{x}} \frac{3t^4 + 1}{(t-3)(t^2 + 3)} dt$

34. Evaluate (a) $\lim_{n \rightarrow \infty} \left[\left(1 + \frac{1}{n^2}\right) \left(1 + \frac{2^2}{n^2}\right) \left(1 + \frac{3^2}{n^2}\right) \dots \left(1 + \frac{n^2}{n^2}\right) \right]^{1/n}$ (b) $\lim_{n \rightarrow \infty} \frac{1}{n} \left[\frac{1}{n+1} + \frac{2}{n+2} + \dots + \frac{3n}{4n} \right]$

35. Find a positive real valued continuously differentiable functions f on the real line such that for all x $f^2(x) = \int_0^x \left((f(t))^2 + (f'(t))^2 \right) dt + e^2$

36. Let f(x) be a function defined on R such that $f'(x) = f'(3-x) \forall x \in [0,3]$ with $f(0) = -32$ and $f(3) = 46$. Then find the value of $\int_0^3 f(x) dx$.

37. Let f and g be function that are differentiable for all real numbers x and that have the following properties:

(i) $f'(x) = f(x) - g(x)$; (ii) $g'(x) = g(x) - f(x)$; (iii) $f(0) = 5$; (iv) $g(0) = 1$

(a) Prove that $f(x) + g(x) = 6$ for all x. (b) Find f(x) and g(x)

38. Consider a function $f(n) = \frac{1}{1+n^2}$. Let $\alpha_n = \frac{1}{n} \sum_{r=1}^n f\left(\frac{r}{n}\right)$ and $\beta_n = \frac{1}{n} \sum_{r=0}^{n-1} f\left(\frac{r}{n}\right)$ for $n = 1, 2, 3, \dots$

Also $\alpha = \lim_{n \rightarrow \infty} \alpha_n$ & $\beta = \lim_{n \rightarrow \infty} \beta_n$. Then prove (a) $\alpha_n < \beta_n$ (b) $\alpha = \beta$ (c) $\alpha_n < \frac{\pi}{4} < \beta_n$

39. Let $U_{10} = \int_0^{\frac{\pi}{2}} x \sin^{10} x dx$, then find the value of $\left(\frac{100U_{10}-1}{U_8}\right)$.

40. Prove the inequalities :

(a) $\frac{\pi}{6} < \int_0^1 \frac{dx}{\sqrt{4-x^2-x^3}} < \frac{\pi\sqrt{2}}{8}$

(b) $2e^{-1/4} < \int_0^2 e^{x^2-x} dx < 2e^2$.

EXERCISE (S-2)

1. Evaluate : $\int_0^1 x (\tan^{-1} x)^2 dx$

2. Evaluate : $\int_0^1 x^5 \sqrt{\frac{1+x^2}{1-x^2}} dx$

3. Let $A = \int_{3/4}^{4/3} \frac{2x^2 + x + 1}{x^3 + x^2 + x + 1} dx$, then find the value of e^A .

4. Evaluate : $\int_0^1 \frac{2-x^2}{(1+x)\sqrt{1-x^2}} dx$

5. Suppose f is continuous, $f(0) = 0$, $f(1) = 1$, $f'(x) > 0$ and $\int_0^1 f(x) dx = \frac{1}{3}$. Find the value of the definite integral $\int_0^1 f^{-1}(y) dy$.

6. Prove that :

(a) $\int_{\alpha}^{\beta} \sqrt{(x-\alpha)(\beta-x)} dx = \frac{(\beta-\alpha)^2 \pi}{8}$

(b) $\int_{\alpha}^{\beta} \sqrt{\frac{x-\alpha}{\beta-x}} dx = (\beta-\alpha) \frac{\pi}{2}$

(c) $\int_{\alpha}^{\beta} \frac{dx}{x\sqrt{(x-\alpha)(\beta-x)}} = \frac{\pi}{\sqrt{\alpha\beta}}$ where $\alpha, \beta > 0$

(d) $\int_{\alpha}^{\beta} \frac{x \cdot dx}{\sqrt{(x-\alpha)(\beta-x)}} = (\alpha+\beta) \frac{\pi}{2}$, where $\alpha < \beta$

7. (a) Let $\beta(n) = \int_0^{n\pi} \sqrt{1-\sin t} dt$. Find the value of $\beta(2) - \beta(1)$.

(b) Determine a positive integer $n \leq 5$, such that $\int_0^1 e^x (x-1)^n dx = 16 - 6e$.

8. Evaluate : $\int_0^1 \frac{1-x}{1+x} \frac{dx}{\sqrt{x+x^2+x^3}}$

9. Evaluate : $\int_0^{\sqrt{3}} \sin^{-1} \frac{2x}{1+x^2} dx$

10. Evaluate : $\int_1^{16} \tan^{-1} \sqrt{\sqrt{x}-1} dx$

11. Evaluate : $\int_{\frac{\sqrt{3a^2+b^2}}{2}}^{\frac{\sqrt{a^2+b^2}}{2}} \frac{x \cdot dx}{\sqrt{(x^2-a^2)(b^2-x^2)}}$

12. (a) Show that $\int_0^{\infty} \frac{dx}{x^2+2x \cos \theta+1} = 2 \int_0^1 \frac{dx}{x^2+2x \cos \theta+1}$

(b) Evaluate : $f(\theta) = \int_0^{\infty} \frac{\tan^{-1} x}{x^2+2x \cos \theta+1} dx, \theta \in (0, \pi)$.

13. Evaluate : $\lim_{n \rightarrow \infty} \frac{1}{n^2} \sum_{k=0}^{n-1} \left[k \int_k^{k+1} \sqrt{(x-k)(k+1-x)} dx \right]$

14. Let $y=f(x)$ be a quadratic function with $f'(2)=1$. Find the value of the integral $\int_{-\pi}^{2+\pi} f(x) \cdot \sin \left(\frac{x-2}{2} \right) dx$.

15. Find the range of the function, $f(x) = \int_{-1}^1 \frac{\sin xdt}{1-2t \cos x+t^2}$

16. Let $f(x) = \begin{cases} -1 & \text{if } -2 \leq x \leq 0 \\ |x-1| & \text{if } 0 < x \leq 2 \end{cases}$ and $g(x) = \int_{-2}^x f(t)dt$. Define $g(x)$ as a function of x and test the continuity and differentiability of $g(x)$ in $(-2, 2)$.

17. If $y = x^{\int_1^x \ln t dt}$, find $\frac{dy}{dx}$ at $x = e$.

18. A curve C_1 is defined by : $\frac{dy}{dx} = e^x \cos x$ for $x \in [0, 2\pi]$ and passes through the origin. Prove that the roots of the function $y = 0$ (other than zero) occurs in the ranges $\frac{\pi}{2} < x < \pi$ and $\frac{3\pi}{2} < x < 2\pi$.

19. Determine a pair of number a and b for which $\int_0^1 \frac{ax+b}{(x^2+3x+2)^2} dx = \frac{5}{2}$.

20. Let $F(x) = \int_{-1}^x \sqrt{4+t^2} dt$ and $G(x) = \int_x^1 \sqrt{4+t^2} dt$ then compute the value of $(FG)'(0)$ where dash denotes the derivative.

21. A student forgot the product rule for differentiation and made the mistake of thinking that $(f \cdot g)' = f'g'$. However he was lucky to get the correct answer. The function f that he used was $f(x) = e^{x^2}$.

If the domain of $g(x)$ was the interval $\left(\frac{1}{2}, \infty\right)$ with $g(1) = e$. Find the value of $g(5)$.

22. (a) $\lim_{n \rightarrow \infty} \left[\frac{n!}{n^n} \right]^{1/n}$ (b) Let $P_n = \sqrt[n]{\frac{(3n)!}{(2n)!}}$ ($n = 1, 2, 3, \dots$), then find $\lim_{n \rightarrow \infty} \frac{P_n}{n}$.

23. If $f(x) = x + \sin x$ and I denotes the value of integral $\int_{\pi}^{2\pi} (f^{-1}(x) + \sin x) dx$ then the value of $\left[\frac{2I}{3} \right]$

(where $[.]$ denotes greatest integer function)

24. Prove the inequalities :

(a) $\frac{1}{3} < \int_0^1 x^{(\sin x + \cos x)^2} dx < \frac{1}{2}$ (b) $\frac{1}{2} \leq \int_0^2 \frac{dx}{2+x^2} \leq \frac{5}{6}$

25. For $a \geq 2$, if the value of the definite integral $\int_0^{\infty} \frac{dx}{a^2 + (x - (1/x))^2}$ equals $\frac{\pi}{5050}$. Find the value of a .

26. Find the value of the definite integral $\int_0^{\pi} |\sqrt{2} \sin x + 2 \cos x| dx$.

27. Evaluate : $\int_0^{2\pi} \frac{dx}{2 + \sin 2x}$

28. Evaluate : $\int_0^{\pi/2} \tan^{-1} \left[\frac{\sqrt{1 + \sin x} + \sqrt{1 - \sin x}}{\sqrt{1 + \sin x} - \sqrt{1 - \sin x}} \right] dx$

29. Let $I = \int_0^{\pi/2} \frac{\cos x + 4}{3 \sin x + 4 \cos x + 25} dx$ and $J = \int_0^{\pi/2} \frac{\sin x + 3}{3 \sin x + 4 \cos x + 25} dx$.

If $25I = a\pi + b/n \frac{c}{d}$ where a, b, c and $d \in \mathbb{N}$ and $\frac{c}{d}$ is not a perfect square of a rational then find the value of $(a + b + c + d)$.

30. Comment upon the nature of roots of the quadratic equation $x^2 + 2x = k + \int_0^1 |t + k| dt$ depending on the value of $k \in \mathbb{R}$.

31. If $U_n = \int_0^{\pi/2} \frac{\sin^2 nx}{\sin^2 x} dx$, then show that $U_1, U_2, U_3, \dots, U_n$ constitute an AP.

Hence or otherwise find the value of U_n .

EXERCISE (JM)

1. $\int_0^{\pi} [\cot x] dx$, where $[\cdot]$ denotes the greatest integer function, is equal to - [AIEEE-2009]

(1) -1 (2) $-\frac{\pi}{2}$ (3) $\frac{\pi}{2}$ (4) 1

2. Let $p(x)$ be a function defined on R such that $p'(x) = p'(1 - x)$, for all $x \in [0, 1]$, $p(0) = 1$ and $p(1) = 41$. Then $\int_0^1 p(x) dx$ equals :- [AIEEE-2010]

(1) $\sqrt{41}$ (2) 21 (3) 41 (4) 42

3. The value of $\int_0^1 \frac{8 \log(1+x)}{1+x^2} dx$ is :- [AIEEE-2011]

(1) $\frac{\pi}{2} \log 2$ (2) $\log 2$ (3) $\pi \log 2$ (4) $\frac{\pi}{8} \log 2$

4. Let $[\cdot]$ denote the greatest integer function then the value of $\int_0^{1.5} x[x^2] dx$ is :- [AIEEE-2011]

(1) $\frac{5}{4}$ (2) 0 (3) $\frac{3}{2}$ (4) $\frac{3}{4}$

5. If $g(x) = \int_0^x \cos 4t dt$, then $g(x + \pi)$ equals : [AIEEE-2012]

(1) $g(x) \cdot g(\pi)$ (2) $\frac{g(x)}{g(\pi)}$ (3) $g(x) + g(\pi)$ (4) $g(x) - g(\pi)$

6. **Statement-I** : The value of the integral $\int_{\pi/6}^{\pi/3} \frac{dx}{1 + \sqrt{\tan x}}$ is equal to $\frac{\pi}{6}$. [JEE-MAIN-2013]

Statement-II : $\int_a^b f(x) dx = \int_a^b f(a + b - x) dx$.

(1) Statement-I is true, Statement-II is true; Statement-II is a **correct** explanation for Statement-I.
 (2) Statement-I is true, Statement-II is true; Statement-II is **not** a correct explanation for Statement-I.
 (3) Statement-I is true, Statement-II is false.
 (4) Statement-I is false, Statement-II is true.

7. The integral $\int_0^{\pi} \sqrt{1 + 4 \sin^2 \frac{x}{2} - 4 \sin \frac{x}{2}} dx$ equals : [JEE-MAIN-2014]

(1) $\pi - 4$ (2) $\frac{2\pi}{3} - 4 - 4\sqrt{3}$ (3) $4\sqrt{3} - 4$ (4) $4\sqrt{3} - 4 - \frac{\pi}{3}$

8. The integral $\int_2^4 \frac{\log x^2}{\log x^2 + \log(36 - 12x + x^2)} dx$ is equal to : [JEE-MAIN-2015]

- (1) 1 (2) 6 (3) 2 (4) 4

9. The integral $\int_{\frac{\pi}{4}}^{\frac{3\pi}{4}} \frac{dx}{1 + \cos x}$ is equal to :- [JEE-MAIN-2017]

- (1) -1 (2) -2 (3) 2 (4) 4

10. The value of $\int_{-\frac{\pi}{2}}^{\frac{\pi}{2}} \frac{\sin^2 x}{1 + 2^x} dx$ is : [JEE-MAIN-2018]

- (1) $\frac{\pi}{2}$ (2) 4π (3) $\frac{\pi}{4}$ (4) $\frac{\pi}{8}$

11. The value of $\int_{-\pi/2}^{\pi/2} \frac{dx}{[x] + [\sin x] + 4}$, where $[t]$ denotes the greatest integer less than or equal to t , is : [JEE-MAIN 2019]

- (1) $\frac{1}{12}(7\pi + 5)$ (2) $\frac{3}{10}(4\pi - 3)$ (3) $\frac{1}{12}(7\pi - 5)$ (4) $\frac{3}{20}(4\pi - 3)$

12. If $\int_0^x f(t) dt = x^2 + \int_x^1 t^2 f(t) dt$, then $f(1/2)$ is : [JEE-MAIN 2019]

- (1) $\frac{6}{25}$ (2) $\frac{24}{25}$ (3) $\frac{18}{25}$ (4) $\frac{4}{5}$

13. Let $I = \int_a^b (x^4 - 2x^2) dx$. If I is minimum then the ordered pair (a, b) is : [JEE-MAIN 2019]

- (1) $(-\sqrt{2}, 0)$ (2) $(-\sqrt{2}, \sqrt{2})$ (3) $(0, \sqrt{2})$ (4) $(\sqrt{2}, -\sqrt{2})$

14. $\lim_{n \rightarrow \infty} \left(\frac{n}{n^2 + 1^2} + \frac{n}{n^2 + 2^2} + \frac{n}{n^2 + 3^2} + \dots + \frac{1}{5n} \right)$ is equal to : [JEE-MAIN 2019]

- (1) $\frac{\pi}{4}$ (2) $\tan^{-1}(2)$ (3) $\tan^{-1}(3)$ (4) $\frac{\pi}{2}$

EXERCISE (JA)

1. Let f be a non-negative function defined on the interval $[0, 1]$. If $\int_0^x \sqrt{1 - (f'(t))^2} dt = \int_0^x f(t) dt$, $0 \leq x \leq 1$, and $f(0) = 0$, then - [JEE 2009, 3]

(A) $f\left(\frac{1}{2}\right) < \frac{1}{2}$ and $f\left(\frac{1}{3}\right) > \frac{1}{3}$ (B) $f\left(\frac{1}{2}\right) > \frac{1}{2}$ and $f\left(\frac{1}{3}\right) > \frac{1}{3}$

(C) $f\left(\frac{1}{2}\right) < \frac{1}{2}$ and $f\left(\frac{1}{3}\right) < \frac{1}{3}$ (D) $f\left(\frac{1}{2}\right) > \frac{1}{2}$ and $f\left(\frac{1}{3}\right) < \frac{1}{3}$

2. If $I_n = \int_{-\pi}^{\pi} \frac{\sin nx}{(1 + \pi^x) \sin x} dx$, $n = 0, 1, 2, \dots$, then - [JEE 2009, 4]

(A) $I_n = I_{n+2}$ (B) $\sum_{m=1}^{10} I_{2m+1} = 10\pi$ (C) $\sum_{m=1}^{10} I_{2m} = 0$ (D) $I_n = I_{n+1}$

3. Let $f: \mathbb{R} \rightarrow \mathbb{R}$ be a continuous function which satisfies $f(x) = \int_0^x f(t) dt$. Then the value of $f(\ln 5)$ is..... [JEE 2009, 4]

4. The value of $\lim_{x \rightarrow 0} \frac{1}{x^3} \int_0^x \frac{t \ln(1+t)}{t^4 + 4} dt$ is [JEE 2010, 3 (-1)]

(A) 0 (B) $\frac{1}{12}$ (C) $\frac{1}{24}$ (D) $\frac{1}{64}$

5. The value(s) of $\int_0^1 \frac{x^4(1-x)^4}{1+x^2} dx$ is (are) [JEE 2010, 3]

(A) $\frac{22}{7} - \pi$ (B) $\frac{2}{105}$ (C) 0 (D) $\frac{71}{15} - \frac{3\pi}{2}$

6. Let f be a real-valued function defined on the interval $(-1, 1)$ such that $e^{-x} f(x) = 2 + \int_0^x \sqrt{t^4 + 1} dt$, for all $x \in (-1, 1)$, and let f^{-1} be the inverse function of f . Then $(f^{-1})'(2)$ is equal to- [JEE2010, 5 (-2)]

(A) 1 (B) $\frac{1}{3}$ (C) $\frac{1}{2}$ (D) $\frac{1}{e}$

7. For any real number x , let $[x]$ denote the largest integer less than or equal to x . Let f be a real valued function defined on the interval $[-10, 10]$ by $f(x) = \begin{cases} x - [x] & \text{if } [x] \text{ is odd,} \\ 1 + [x] - x & \text{if } [x] \text{ is even} \end{cases}$

Then the value of $\frac{\pi^2}{10} \int_{-10}^{10} f(x) \cos \pi x dx$ is [JEE 2010, 3]

8. The value of $\int_{\frac{1}{\sqrt{\ln 2}}}^{\frac{1}{\sqrt{\ln 3}}} \frac{x \sin x^2}{\sin x^2 + \sin(\ln 6 - x^2)} dx$ is [JEE 2011, 3 (-1)]

- (A) $\frac{1}{4} \ln \frac{3}{2}$ (B) $\frac{1}{2} \ln \frac{3}{2}$ (C) $\ln \frac{3}{2}$ (D) $\frac{1}{6} \ln \frac{3}{2}$

9. Let S be the area of the region enclosed by $y = e^{-x^2}$, $y = 0$, $x = 0$, and $x = 1$. Then - [JEE 2012, 4]

- (A) $S \geq \frac{1}{e}$ (B) $S \geq 1 - \frac{1}{e}$ (C) $S \leq \frac{1}{4} \left(1 + \frac{1}{\sqrt{e}}\right)$ (D) $S \leq \frac{1}{\sqrt{2}} + \frac{1}{\sqrt{e}} \left(1 - \frac{1}{\sqrt{2}}\right)$

10. The value of the integral $\int_{-\pi/2}^{\pi/2} \left(x^2 + \ln \frac{\pi+x}{\pi-x}\right) \cos x dx$ is [JEE 2012, 3, (-1)]

- (A) 0 (B) $\frac{\pi^2}{2} - 4$ (C) $\frac{\pi^2}{2} + 4$ (D) $\frac{\pi^2}{2}$

11. For $a \in \mathbb{R}$ (the set of all real numbers), $a \neq -1$.

$$\lim_{n \rightarrow \infty} \frac{(1^a + 2^a + \dots + n^a)}{(n+1)^{a-1} [(na+1) + (na+2) + \dots + (na+n)]} = \frac{1}{60}$$

Then $a =$ [JEE(Advanced) 2013, 3, (-1)]

- (A) 5 (B) 7 (C) $-\frac{15}{2}$ (D) $-\frac{17}{2}$

12. Let $f : [a, b] \rightarrow [1, \infty)$ be a continuous function and let $g : \mathbb{R} \rightarrow \mathbb{R}$ be defined as

$$g(x) = \begin{cases} 0 & \text{if } x < a \\ \int_a^x f(t) dt & \text{if } a \leq x \leq b \\ \int_a^b f(t) dt & \text{if } x > b \end{cases}$$

Then [JEE(Advanced)-2014, 3]

- (A) $g(x)$ is continuous but not differentiable at a
 (B) $g(x)$ is differentiable on \mathbb{R}
 (C) $g(x)$ is continuous but not differentiable at b
 (D) $g(x)$ is continuous and differentiable at either a or b but not both.

13. The value of $\int_0^1 4x^3 \left\{ \frac{d^2}{dx^2} (1-x^2)^5 \right\} dx$ is [JEE(Advanced)-2014, 3]

14. The following integral $\int_{\frac{\pi}{4}}^{\frac{\pi}{2}} (2 \operatorname{cosec} x)^{17} dx$ is equal to - [JEE(Advanced)-2014, 3(-1)]

- (A) $\int_0^{\log(1+\sqrt{2})} 2(e^u + e^{-u})^{16} du$ (B) $\int_0^{\log(1+\sqrt{2})} (e^u + e^{-u})^{17} du$
 (C) $\int_0^{\log(1+\sqrt{2})} (e^u - e^{-u})^{17} du$ (D) $\int_0^{\log(1+\sqrt{2})} 2(e^u - e^{-u})^{16} du$

15. Let $f : [0, 2] \rightarrow \mathbb{R}$ be a function which is continuous on $[0, 2]$ and is differentiable on $(0, 2)$ with $f(0) = 1$. Let $F(x) = \int_0^{x^2} f(\sqrt{t}) dt$ for $x \in [0, 2]$. If $F'(x) = f'(x)$ for all $x \in (0, 2)$, then $F(2)$ equals -
- (A) $e^2 - 1$ (B) $e^4 - 1$ (C) $e - 1$ (D) e^4

[JEE(Advanced)-2014, 3(-1)]

Paragraph For Questions 16 and 17

Given that for each $a \in (0, 1)$, $\lim_{h \rightarrow 0^+} \int_h^{1-h} t^{-a} (1-t)^{a-1} dt$ exists. Let this limit be $g(a)$. In addition, it is given that the function $g(a)$ is differentiable on $(0, 1)$.

16. The value of $g\left(\frac{1}{2}\right)$ is -
- (A) π (B) 2π (C) $\frac{\pi}{2}$ (D) $\frac{\pi}{4}$

[JEE(Advanced)-2014, 3(-1)]

17. The value of $g'\left(\frac{1}{2}\right)$ is-
- (A) $\frac{\pi}{2}$ (B) π (C) $-\frac{\pi}{2}$ (D) 0

[JEE(Advanced)-2014, 3(-1)]

18. **List-I**

List-II

- P.** The number of polynomials $f(x)$ with non-negative integer coefficients of degree ≤ 2 , satisfying $f(0) = 0$ and $\int_0^1 f(x) dx = 1$, is **1.** 8
- Q.** The number of points in the interval $[-\sqrt{13}, \sqrt{13}]$ at which $f(x) = \sin(x^2) + \cos(x^2)$ attains its maximum value, is **2.** 2
- R.** $\int_{-2}^2 \frac{3x^2}{(1+e^x)} dx$ equals **3.** 4
- S.** $\frac{\left(\int_{-\frac{1}{2}}^{\frac{1}{2}} \cos 2x \log\left(\frac{1+x}{1-x}\right) dx\right)}{\left(\int_0^{\frac{1}{2}} \cos 2x \log\left(\frac{1+x}{1-x}\right) dx\right)}$ equals **4.** 0

Codes :

	P	Q	R	S
(A)	3	2	4	1
(B)	2	3	4	1
(C)	3	2	1	4
(D)	2	3	1	4

[JEE(Advanced)-2014, 3(-1)]

19. Let $f : \mathbb{R} \rightarrow \mathbb{R}$ be a function defined by $f(x) = \begin{cases} [x] & , x \leq 2 \\ 0 & , x > 2 \end{cases}$,

where $[x]$ is the greatest integer less than or equal to x . If $I = \int_{-1}^2 \frac{xf(x^2)}{2+f(x+1)} dx$, then the value of

$(4I - 1)$ is

[JEE 2015, 4M, -0M]

20. If $\alpha = \int_0^1 (e^{9x+3\tan^{-1}x}) \left(\frac{12+9x^2}{1+x^2} \right) dx$, where $\tan^{-1}x$ takes only principal values, then the value of $\left(\log_e \left| 1 + \alpha \right| - \frac{3\pi}{4} \right)$ is

[JEE 2015, 4M, -0M]

21. Let $f : \mathbb{R} \rightarrow \mathbb{R}$ be a continuous odd function, which vanishes exactly at one point and $f(1) = \frac{1}{2}$. Suppose

that $F(x) = \int_{-1}^x f(t) dt$ for all $x \in [-1, 2]$ and $G(x) = \int_{-1}^x t |f(f(t))| dt$ for all $x \in [-1, 2]$. If $\lim_{x \rightarrow 1} \frac{F(x)}{G(x)} = \frac{1}{14}$,

then the value of $f\left(\frac{1}{2}\right)$ is

[JEE 2015, 4M, -0M]

22. The option(s) with the values of a and L that satisfy the following equation is(are)

$$\frac{\int_0^{4\pi} e^t (\sin^6 at + \cos^4 at) dt}{\int_0^{\pi} e^t (\sin^6 at + \cos^4 at) dt} = L ?$$

[JEE 2015, 4M, -0M]

- (A) $a = 2, L = \frac{e^{4\pi} - 1}{e^{\pi} - 1}$ (B) $a = 2, L = \frac{e^{4\pi} + 1}{e^{\pi} + 1}$ (C) $a = 4, L = \frac{e^{4\pi} - 1}{e^{\pi} - 1}$ (D) $a = 4, L = \frac{e^{4\pi} + 1}{e^{\pi} + 1}$

23. Let $f(x) = 7\tan^8 x + 7\tan^6 x - 3\tan^4 x - 3\tan^2 x$ for all $x \in \left(-\frac{\pi}{2}, \frac{\pi}{2}\right)$. Then the correct expression(s) is(are)

[JEE 2015, 4M, -0M]

- (A) $\int_0^{\pi/4} xf(x) dx = \frac{1}{12}$ (B) $\int_0^{\pi/4} f(x) dx = 0$ (C) $\int_0^{\pi/4} xf(x) dx = \frac{1}{6}$ (D) $\int_0^{\pi/4} f(x) dx = 1$

24. Let $f'(x) = \frac{192x^3}{2 + \sin^4 \pi x}$ for all $x \in \mathbb{R}$ with $f\left(\frac{1}{2}\right) = 0$. If $m \leq \int_{1/2}^1 f(x) dx \leq M$, then the possible values of

m and M are

[JEE 2015, 4M, -0M]

- (A) $m = 13, M = 24$ (B) $m = \frac{1}{4}, M = \frac{1}{2}$ (C) $m = -11, M = 0$ (D) $m = 1, M = 12$

Paragraph For Questions 25 and 26

Let $F : \mathbb{R} \rightarrow \mathbb{R}$ be a thrice differentiable function. Suppose that $F(1) = 0, F(3) = -4, F'(x) < 0$ for all $x \in (1/2, 3)$. Let $f(x) = xF(x)$ for all $x \in \mathbb{R}$.

25. The correct statement(s) is(are)

[JEE 2015, 4M, -0M]

- (A) $f'(1) < 0$ (B) $f(2) < 0$
 (C) $f'(x) \neq 0$ for any $x \in (1, 3)$ (D) $f'(x) = 0$ for some $x \in (1, 3)$

26. If $\int_1^3 x^2 F'(x) dx = -12$ and $\int_1^3 x^3 F''(x) dx = 40$, then the correct expression(s) is(are) [JEE 2015, 4M, -0M]

- (A) $9f'(3) + f'(1) - 32 = 0$ (B) $\int_1^3 f(x) dx = 12$
 (C) $9f'(3) - f'(1) + 32 = 0$ (D) $\int_1^3 f(x) dx = -12$

27. The value of $\int_{-\frac{\pi}{2}}^{\frac{\pi}{2}} \frac{x^2 \cos x}{1 + e^x} dx$ is equal to [JEE(Advanced)-2016, 3(-1)]

- (A) $\frac{\pi^2}{4} - 2$ (B) $\frac{\pi^2}{4} + 2$ (C) $\pi^2 - e^{\frac{\pi}{2}}$ (D) $\pi^2 + e^{\frac{\pi}{2}}$

28. Let $f : \mathbb{R} \rightarrow \mathbb{R}$ be a differentiable function such that $f(0) = 0$, $f\left(\frac{\pi}{2}\right) = 3$ and $f'(0) = 1$. If

$$g(x) = \int_x^{\frac{\pi}{2}} [f'(t) \operatorname{cosec} t - \cot t \operatorname{cosec} t f(t)] dt$$

for $x \in \left(0, \frac{\pi}{2}\right]$, then $\lim_{x \rightarrow 0} g(x) =$ [JEE(Advanced)-2017, 3]

29. If $I = \sum_{k=1}^{98} \int_k^{k+1} \frac{k+1}{x(x+1)} dx$, then [JEE(Advanced)-2017, 4]

- (A) $I < \frac{49}{50}$ (B) $I < \log_e 99$ (C) $I > \frac{49}{50}$ (D) $I > \log_e 99$

30. If $g(x) = \int_{\sin x}^{\sin(2x)} \sin^{-1}(t) dt$, then [JEE(Advanced)-2017, 4]

- (A) $g'\left(\frac{\pi}{2}\right) = -2\pi$ (B) $g'\left(-\frac{\pi}{2}\right) = 2\pi$ (C) $g'\left(\frac{\pi}{2}\right) = 2\pi$ (D) $g'\left(-\frac{\pi}{2}\right) = -2\pi$

31. For each positive integer n , let

$$y_n = \frac{1}{n} (n+1)(n+2)\dots(n+n)^{1/n}$$

For $x \in \mathbb{R}$, let $[x]$ be the greatest integer less than or equal to x . If $\lim_{n \rightarrow \infty} y_n = L$, then the value of

$[L]$ is _____ [JEE(Advanced)-2018, 3(0)]

32. The value of the integral

$$\int_0^{\frac{1}{2}} \frac{1 + \sqrt{3}}{\left((x+1)^2 (1-x)^6\right)^{\frac{1}{4}}} dx$$

is _____ . [JEE(Advanced)-2018, 3(0)]

ANSWER KEY

DEFINITE INTEGRATION

EXERCISE (O-1)

1. A 2. C 3. A 4. B 5. C 6. A 7. A 8. D
 9. B 10. A 11. A 12. D 13. A 14. B 15. D 16. A
 17. B 18. C 19. B 20. D 21. D 22. B 23. C 24. A
 25. D 26. B 27. A 28. C 29. C 30. A

EXERCISE (O-2)

1. C 2. A 3. A 4. A 5. D 6. B 7. D 8. B
 9. B 10. D 11. C 12. C 13. B 14. C 15. A 16. B
 17. A 18. A 19. A,C 20. B,C,D 21. A,B,C,D 22. C,D 23. A,C,D
 24. B,C,D

EXERCISE (S-1)

1. (i) $\frac{\pi^2}{8} - \frac{\pi}{4}(1 + \ln 2) + \frac{1}{2}$; (ii) $\frac{\pi \ln 3}{2}$ 2. $\frac{\pi^2}{4}$ 3. $\frac{1}{2}$ 4. $\frac{1}{2}[e^{\pi/2}(\cos 1 + \sin 1) - 1]$
 5. $e^{1+e} + e^{1-e} + e^{-e} - e^e + e - e^{-1}$ 7. 125 8. $1 - \sec(1)$ 9. $\ln 2$ 10. 5250
 11. $\frac{\pi}{2\sqrt{2}} - \frac{16\sqrt{2}}{5}$ 12. $4\sqrt{2} - 4\ln(\sqrt{2} + 1)$ 13. 4 14. $\frac{\pi}{8}\ln 2$ 15. $\frac{\pi^2}{6\sqrt{3}}$ 16. $\frac{\pi}{8}\ln 2$
 17. 2012 18. 153 19. $\frac{\pi(a+b)}{2\sqrt{2}}$ 20. 5 21. $\frac{(a\pi + 2b)\pi}{3\sqrt{3}}$ 22. $\frac{\pi(\pi + 3)}{2}$
 23. $\frac{3\pi}{2}$ 24. $2/3$ 25. $\tan^{-1}(a) \cdot \ln \sqrt{1+a^2}$ 26. $\frac{1}{2}\left[\frac{\pi}{6} + \ln 3 - \ln 2\right]$ 27. 3 28. $\frac{\pi + 4}{666}$
 30. $\frac{8}{\pi}$ 31. $-\cos x$ 32. (a) $c = 1$ and Limit will be $\frac{\sqrt{3}}{2}$; (b) $a = 4$ and $b = 1$ 33. 13.5
 34. (a) $2e^{(1/2)(\pi-4)}$; (b) $3 - \ln 4$ 35. $f(x) = e^{x+1}$ 36. 21 37. (b) $f(x) = 3 + 2e^{2x}$; $g(x) = 3 - 2e^{2x}$
 39. 90

EXERCISE (S-2)

1. $\frac{\pi}{4}\left(\frac{\pi}{4} - 1\right) + \frac{1}{2}\ln 2$ 2. $\frac{3\pi + 8}{24}$ 3. $\frac{16}{9}$ 4. $\frac{\pi}{2}$ 5. $2/3$ 7. (a) 4; (b) 3
 8. $\frac{\pi}{3}$ 9. $\frac{\pi\sqrt{3}}{3}$ 10. $\frac{16\pi}{3} - 2\sqrt{3}$ 11. $\frac{\pi}{12}$ 12. (b) $\frac{\pi\theta}{4\sin\theta}$ 13. $\frac{\pi}{16}$
 14. $I = 8$ as $\int_0^{\pi/2} y \sin y dy = 1$ 15. $\left\{-\frac{\pi}{2}, \frac{\pi}{2}\right\}$

16. $g(x)$ is cont. in $(-2,2)$; $g(x)$ is der. at $x=1$ & not der. at $x=0$. Note that : $g(x) = \begin{cases} -(x+2) & \text{for } -2 \leq x \leq 0 \\ -2+x-\frac{x^2}{2} & \text{for } 0 < x < 1 \\ \frac{x^2}{2}-x-1 & \text{for } 1 \leq x \leq 2 \end{cases}$

17. $1+e$ 19. $a=15, b=\frac{45}{2}$ 20. 0 21. $g(5) = 3e^5$ 22. (a) $\frac{1}{e}$; (b) $\frac{27}{4e}$

23. 9 25. 2525 26. $2\sqrt{6}$ 27. $\frac{2\pi}{\sqrt{3}}$ 28. $\frac{3\pi^2}{16}$ 29. 62

30. real & distinct $\forall k \in \mathbb{R}$ 31. $U_n = \frac{n\pi}{2}$

EXERCISE (JM)

1. 2 2. 2 3. 3 4. 4 5. 3,4 6. 4 7. 4 8. 1
 9. 3 10. 3 11. 4 12. 2 13. 2 14. 2

EXERCISE (JA)

1. C 2. A,B,C 3. 0 4. B 5. A 6. B 7. 4 8. A
 9. A,B,D 10. B 11. B 12. A,C 13. 2 14. A 15. B 16. A
 17. D 18. D 19. 0 20. 9 21. 7 22. A,C 23. A,B 24. D
 25. A,B,C 26. C,D 27. A 28. 2 29. B,C 30. Bonus 22. 1 23. 2